

Write your name here

Surname

Other names

Centre Number

Candidate Number

Edexcel GCE

Chemistry

Advanced Subsidiary

Unit 1: The Core Principles of Chemistry

Thursday 13 January 2011 – Morning

Time: 1 hour 30 minutes

Paper Reference

6CH01/01

Candidates may use a calculator.

Total Marks

Instructions

- Use **black** ink or ball-point pen.
- **Fill in the boxes** at the top of this page with your name, centre number and candidate number.
- Answer **all** questions.
- Answer the questions in the spaces provided – *there may be more space than you need.*

Information

- The total mark for this paper is 80.
- The marks for **each** question are shown in brackets – *use this as a guide as to how much time to spend on each question.*
- Questions labelled with an **asterisk** (*) are ones where the quality of your written communication will be assessed – *you should take particular care with your spelling, punctuation and grammar, as well as the clarity of expression, on these questions.*
- A Periodic Table is printed on the back cover of this paper.

Advice

- Read each question carefully before you start to answer it.
- Keep an eye on the time.
- Try to answer every question.
- Check your answers if you have time at the end.

Turn over ►

N37962A

©2011 Edexcel Limited.

7/7/5/2/



edexcel 
advancing learning, changing lives

SECTION A

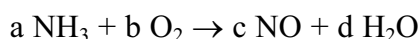
Answer ALL the questions in this section. You should aim to spend no more than 20 minutes on this section. For each question, select one answer from A to D and put a cross in the box . If you change your mind, put a line through the box and then mark your new answer with a cross .

1 The compound butane has

- A the empirical formula C_4H_{10} and the molecular formula C_2H_5 .
- B the empirical formula C_2H_5 and the molecular formula C_4H_{10} .
- C the empirical formula C_2H_5 and the molecular formula C_nH_{2n+2} .
- D the empirical formula C_nH_{2n+2} and the molecular formula C_4H_{10} .

(Total for Question 1 = 1 mark)

2 For the oxidation of ammonia



the values of the coefficients in the balanced equation are

- A $a = 2, b = 3, c = 2$ and $d = 3$
- B $a = 4, b = 7, c = 4$ and $d = 4$
- C $a = 4, b = 5, c = 4$ and $d = 6$
- D $a = 6, b = 7, c = 6$ and $d = 9$

(Total for Question 2 = 1 mark)

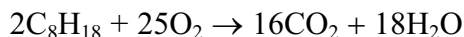
3 The Avogadro constant is $6.0 \times 10^{23} \text{ mol}^{-1}$. Therefore the number of **atoms** in 1 mol of carbon dioxide is

- A 2.0×10^{23}
- B 6.0×10^{23}
- C 1.2×10^{24}
- D 1.8×10^{24}

(Total for Question 3 = 1 mark)



4 The equation for the complete combustion of octane is



(a) The mass of 10 mol of octane is

(1)

- A 0.66 kg
- B 1.14 kg
- C 2.10 kg
- D 2.28 kg

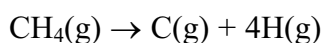
(b) The volume of 1 mol of any gas (measured at room temperature and pressure) is 24 dm^3 . Hence the volume of oxygen (measured at room temperature and pressure) required for the complete combustion of 10 mol of octane is

(1)

- A 240 dm^3
- B 300 dm^3
- C 3000 dm^3
- D 6000 dm^3

(Total for Question 4 = 2 marks)

5 The enthalpy change for the reaction



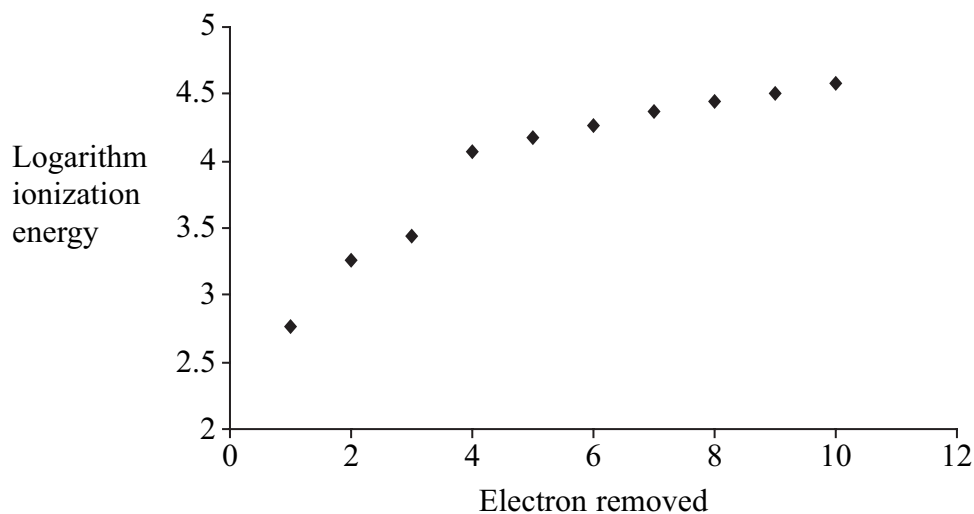
is $+1648 \text{ kJ mol}^{-1}$. Hence the mean bond enthalpy for the C–H bond is

- A $+329.6 \text{ kJ mol}^{-1}$
- B $+412.0 \text{ kJ mol}^{-1}$
- C $+1648 \text{ kJ mol}^{-1}$
- D $+6592 \text{ kJ mol}^{-1}$

(Total for Question 5 = 1 mark)



- 6 The graph below represents the successive ionization energies of an element **X** plotted against the number of the electron removed. **X** is not the symbol for the element.



- (a) From this graph it is possible to deduce the group in the Periodic Table to which **X** belongs. **X** is in

(1)

- A Group 1
 B Group 3
 C Group 5
 D Group 7

- (b) From the graph it is possible to deduce that the most stable ion of **X** will be

(1)

- A X^{3+}
 B X^+
 C X^-
 D X^{3-}

(Total for Question 6 = 2 marks)

Use this space for any rough working. Anything you write in this space will gain no credit.



7 Element **R** is in Group 1 of the Periodic Table and element **T** is in Group 6. **R** and **T** are not the symbols for the elements.

(a) The compound of **R** and **T** will have the formula

(1)

- A RT
- B RT₆
- C RT₂
- D R₂T

(b) The compound of **R** and **T** will have bonding which is predominantly

(1)

- A ionic.
- B covalent.
- C dative covalent.
- D metallic.

(c) In terms of its electrical conductivity, the compound of **R** and **T** will

(1)

- A conduct when solid and liquid.
- B conduct when solid but not when liquid.
- C conduct when liquid but not when solid.
- D not conduct when solid or liquid.

(Total for Question 7 = 3 marks)

Use this space for any rough working. Anything you write in this space will gain no credit.

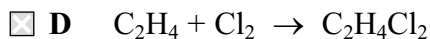
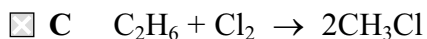
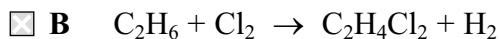
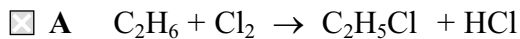


N 3 7 9 6 2 A 0 5 2 4

8 Ethane reacts with chlorine when the substances are exposed to UV radiation.

(a) The equation for this reaction is

(1)



(b) The role of the UV radiation in the reaction is to

(1)

A break the Cl—Cl bond forming Cl• free radicals.

B break the Cl—Cl bond forming Cl⁺ and Cl⁻ ions.

C break the C—C bond in ethane forming CH₃• free radicals.

D break a C—H bond in ethane forming C₂H₅• free radicals.

(c) The overall reaction between ethane and chlorine is best described as

(1)

A addition.

B homolytic fission.

C heterolytic fission.

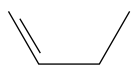
D substitution.

(Total for Question 8 = 3 marks)

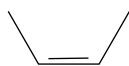
Use this space for any rough working. Anything you write in this space will gain no credit.



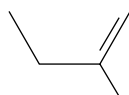
9 This question concerns the following compounds



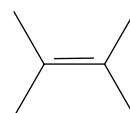
A



B



C



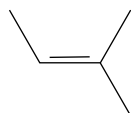
D

Which of these compounds will show geometric (*E-Z* or *cis/trans*) isomerism?

- A
- B
- C
- D

(Total for Question 9 = 1 mark)

10 The correct name for the compound shown below is



- A 2-methylbut-3-ene
- B 3-methylbut-2-ene
- C 3-methylbut-3-ene
- D 2-methylbut-2-ene

(Total for Question 10 = 1 mark)

11 Most compounds of lead are insoluble, an exception being lead(II) nitrate. Therefore a good method of preparing lead(II) sulfate is

- A adding dilute sulfuric acid to lead metal.
- B adding concentrated sulfuric acid to lead metal.
- C adding dilute sulfuric acid to lead(II) nitrate solution.
- D adding dilute sulfuric acid to solid lead(II) oxide.

(Total for Question 11 = 1 mark)



12 Metals usually have high melting temperatures and boiling temperatures because there are

- A strong attractions between the ions.
- B strong attractions between the delocalised electrons.
- C strong attractions between the ions and the delocalised electrons.
- D strong intermolecular forces.

(Total for Question 12 = 1 mark)

13 In 2006, the concentration of carbon dioxide in the atmosphere was 382 ppm. This is equivalent to

- A 0.00382%
- B 0.0382%
- C 0.382%
- D 3.82%

(Total for Question 13 = 1 mark)

14 A hazard that is particularly associated with alkanes is that they are

- A corrosive.
- B flammable.
- C toxic by inhalation.
- D toxic by skin absorption.

(Total for Question 14 = 1 mark)

TOTAL FOR SECTION A = 20 MARKS



BLANK PAGE



SECTION B

Answer ALL the questions. Write your answers in the spaces provided.

15 The relative atomic mass of an element is determined using a mass spectrometer.

(a) Define the term **relative atomic mass**.

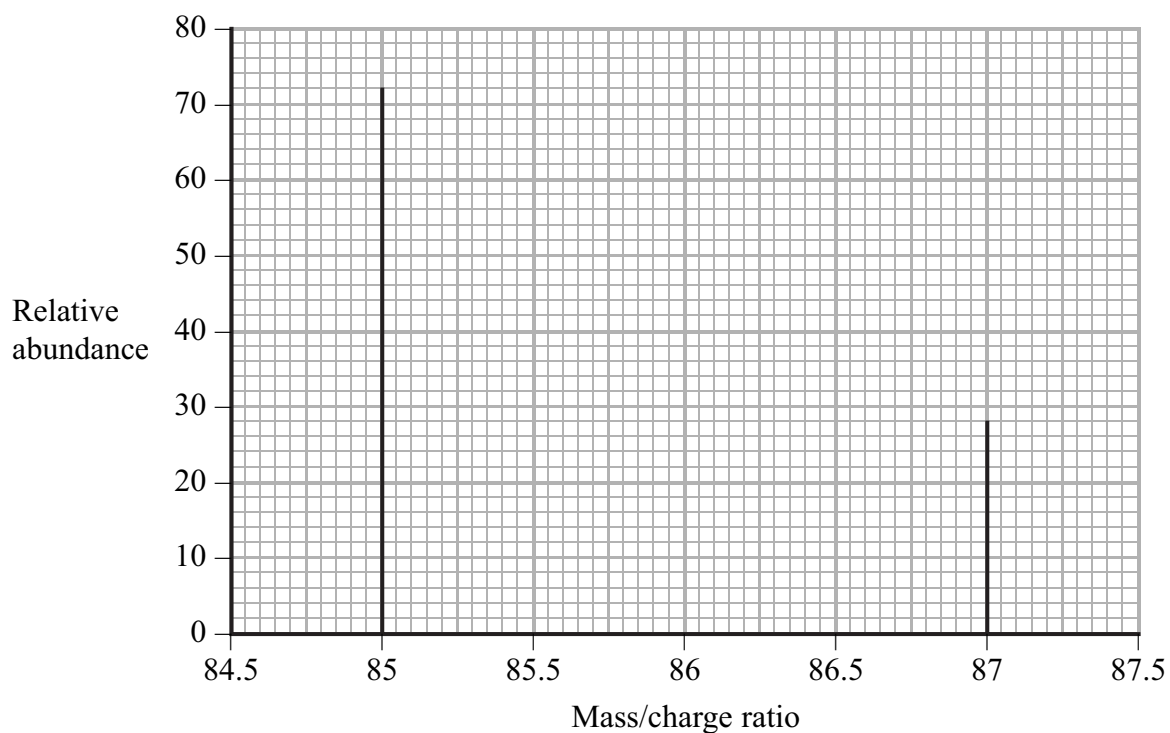
(2)

.....

.....

.....

(b) The mass spectrum of rubidium is shown below.



(i) Explain why there are two peaks in the spectrum.

(1)

.....

.....

(ii) Use the spectrum to calculate the relative atomic mass of rubidium.

(2)

(Total for Question 15 = 5 marks)



16 (a) Coral reefs are produced by living organisms and predominantly made up of calcium carbonate. It has been suggested that coral reefs will be damaged by global warming because of the increased acidity of the oceans due to higher concentrations of carbon dioxide.

(i) Write a chemical equation to show how the presence of carbon dioxide in water results in the formation of carbonic acid. State symbols are **not** required.

(1)

(ii) Write the **ionic** equation to show how acids react with carbonates. State symbols are **not** required.

(2)



- (b) One method of determining the proportion of calcium carbonate in a coral is to dissolve a known mass of the coral in excess acid and measure the volume of carbon dioxide formed.

In such an experiment, 1.13 g of coral was dissolved in 25 cm³ of hydrochloric acid (an excess) in a conical flask. When the reaction was complete, 224 cm³ of carbon dioxide had been collected over water using a 250 cm³ measuring cylinder.

- (i) Draw a labelled diagram of the apparatus that could be used to carry out this experiment.

(2)

- (ii) Suggest how you would mix the acid and the coral to ensure that no carbon dioxide escaped from the apparatus.

(1)

.....

.....

.....

- (iii) Calculate the number of moles of carbon dioxide collected in the experiment.

[The molar volume of any gas is 24 000 cm³ mol⁻¹ at room temperature and pressure.]

(1)



- (iv) Complete the equation below for the reaction between calcium carbonate and hydrochloric acid by inserting the missing state symbols. (1)



- (v) Calculate the mass of 1 mol of calcium carbonate.

[Assume relative atomic masses: Ca = 40, C = 12, O = 16.] (1)

- (vi) Use your data and the equation in (iv) to calculate the mass of calcium carbonate in the sample and the percentage by mass of calcium carbonate in the coral. Give your final answer to **three** significant figures. (2)

- (vii) When this experiment is repeated, the results are inconsistent. Suggest a reason for this other than errors in the procedure, measurements or calculations. (1)

.....

.....

(Total for Question 16 = 12 marks)



17 This question is about the element chlorine (atomic number = 17).

(a) Complete the electronic structure of chlorine.

(1)

$1s^2 2s^2$

(b) Chlorine forms compounds with magnesium and with carbon.

(i) Draw a dot and cross diagram to show the electronic structure of the compound magnesium chloride (only the outer electrons need be shown).
Include the charges present.

(2)

(ii) Draw a dot and cross diagram to show the electronic structure of the compound tetrachloromethane (only the outer electrons need be shown).

(2)



*(iii) Suggest why the melting temperature of magnesium oxide is higher than that of magnesium chloride, even though both are almost 100% ionic.

(3)

.....

.....

.....

.....

.....

.....

.....

.....

.....

.....

.....

(c) Magnesium chloride may be prepared from magnesium by reaction with chlorine or with hydrochloric acid. Compare these two preparations in terms of the atom economies of the reactions. No calculation is required.

(2)

.....

.....

.....

.....

(Total for Question 17 = 10 marks)



BLANK PAGE



18 Alkenes are unsaturated hydrocarbons which, because of their reactivity, are important industrial starting materials. Alkenes for industrial use are obtained by cracking alkanes.

(a) Write the equation for the cracking of decane ($C_{10}H_{22}$) to form 1 molecule of propene as the only alkene.

(1)

(b) The carbon–carbon double bond in alkenes consists of a σ and a π bond.

(i) Explain, using diagrams, the difference between the σ and the π bond in the carbon–carbon double bond of an alkene.

(4)

Diagrams

Explanation

.....

.....

.....

.....

(ii) State the type and mechanism involved in the typical reaction of alkenes.

(1)

.....



*(iii) By considering the strength and structure of the π bond, explain why alkenes are more reactive than alkanes.

(2)

.....

.....

.....

.....

.....

(c) When propene reacts with hydrogen bromide, there are two possible products.

(i) Draw a displayed formula of each of these products and label the major product.

(2)

(ii) Give the mechanism for the reaction of propene with hydrogen bromide which forms the major product.

(3)



(iii) Explain, by referring to the mechanism, why the major product is formed.

(2)

.....

.....

.....

.....

(d) The polymer poly(propene) is manufactured from propene.

(i) Write an equation for the polymerization, drawing the displayed formula of the repeat unit of poly(propene).

(3)

(ii) UV radiation causes poly(propene) to degrade. Suggest one advantage and one disadvantage of this.

(2)

Advantage

.....

Disadvantage

.....

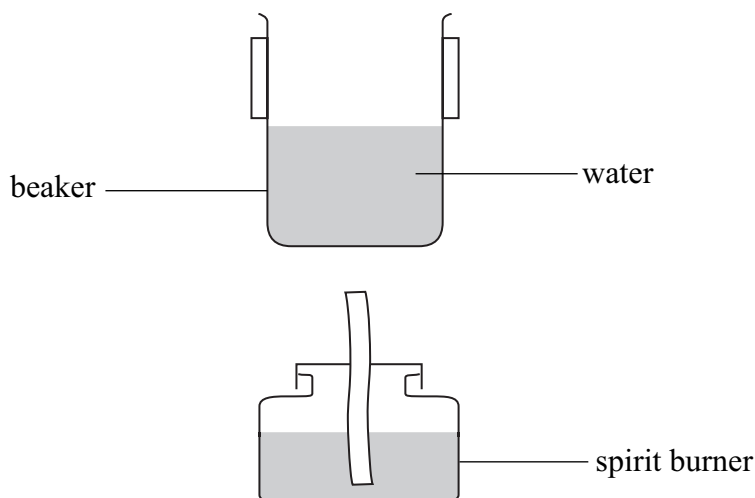
(Total for Question 18 = 20 marks)



BLANK PAGE



- 19 The enthalpy change of combustion of ethanol was determined using the apparatus shown in the diagram below. In the experiment, the temperature increase of the water in the beaker is measured when a known mass of the ethanol is burned.



- (a) The results of the experiment are summarised in the table below.

Mass of water in the beaker	250.00 g
Mass of spirit burner + contents (initial)	63.21 g
Mass of spirit burner + contents (final)	62.47 g
Temperature of water (initial)	21.0 °C
Temperature of water (final)	31.5 °C

- (i) Calculate the heat energy produced by the combustion of the alcohol using the equation

$$\text{heat energy produced (J)} = \text{mass of water} \times 4.18 \times \text{temperature change}$$

(1)



(ii) Calculate the number of moles of ethanol burned in this experiment (the formula of ethanol is C_2H_5OH).

(3)

(iii) Use the equation below to calculate the enthalpy change of combustion of ethanol in kJ mol^{-1} . Give the value an appropriate sign.

$$\Delta H = \text{heat energy produced} \div \text{number of moles}$$

(2)

(b) The data book value for the enthalpy change of combustion of ethanol is $-1370 \text{ kJ mol}^{-1}$.

(i) Calculate the percentage error in the value calculated in (a)(iii) in comparison with the data book value.

(1)



- (ii) List **three** ways in which the design of the experiment causes the results to be so different from the data book value. (You should be specific but detailed explanations are not required.)

(3)

1

2

3

- (iii) Use the data book values for enthalpy changes of combustion given in the table below to calculate the enthalpy change of formation of ethanol.

(3)

Substance	Enthalpy change of combustion / kJ mol^{-1}
C(s, graphite)	-394
H ₂ (g)	-286
C ₂ H ₅ OH(l)	-1370

(Total for Question 19 = 13 marks)

TOTAL FOR SECTION B = 60 MARKS
TOTAL FOR PAPER = 80 MARKS



The Periodic Table of Elements

1	2	3	4	5	6	7	0 (8)
6.9 Li lithium 3	9.0 Be beryllium 4						4.0 He helium 2
23.0 Na sodium 11	24.3 Mg magnesium 12						20.2 Ne neon 10
39.1 K potassium 19	40.1 Ca calcium 20						39.9 Ar argon 18
85.5 Rb rubidium 37	87.6 Sr strontium 38						83.8 Kr krypton 36
132.9 Cs caesium 55	137.3 Ba barium 56						131.3 Xe xenon 54
[223] Fr francium 87	[226] Ra radium 88						[222] Rn radon 86

(1)	(2)	(3)	(4)	(5)	(6)	(7)	(8)	(9)	(10)	(11)	(12)	(13)	(14)	(15)	(16)	(17)	(18)			
							1.0 H hydrogen 1					10.8 B boron 5	12.0 C carbon 6	14.0 N nitrogen 7	16.0 O oxygen 8	19.0 F fluorine 9	20.2 Ne neon 10			
												27.0 Al aluminium 13	28.1 Si silicon 14	31.0 P phosphorus 15	32.1 S sulfur 16	35.5 Cl chlorine 17	39.9 Ar argon 18			
												69.7 Ga gallium 31	72.6 Ge germanium 32	74.9 As arsenic 33	79.0 Se selenium 34	79.9 Br bromine 35	83.8 Kr krypton 36			
												112.4 Cd cadmium 48	114.8 In indium 49	118.7 Sn tin 50	127.6 Te tellurium 52	126.9 I iodine 53	131.3 Xe xenon 54			
												200.6 Hg mercury 80	204.4 Tl thallium 81	207.2 Pb lead 82	209.0 Bi bismuth 83	[210] Po polonium 84	[222] Rn radon 86			
												197.0 Au gold 79	195.1 Pt platinum 78	197.0 Au gold 79	[272] Rg roentgenium 111					
												55.8 Fe iron 26	58.9 Co cobalt 27	58.9 Co cobalt 27	58.7 Ni nickel 28	58.7 Ni nickel 28	63.5 Cu copper 29	65.4 Zn zinc 30		
												101.1 Ru ruthenium 44	102.9 Rh rhodium 45	102.9 Rh rhodium 45	106.4 Pd palladium 46	106.4 Pd palladium 46	107.9 Ag silver 47	112.4 Cd cadmium 48		
												91.2 Zr zirconium 40	92.9 Nb niobium 41	92.9 Nb niobium 41	95.9 Mo molybdenum 42	95.9 Mo molybdenum 42	97.9 Tc technetium 43	101.1 Ru ruthenium 44		
												45.0 Sc scandium 21	47.9 Ti titanium 22	50.9 V vanadium 23	52.0 Cr chromium 24	54.9 Mn manganese 25	55.8 Fe iron 26	58.7 Ni nickel 28		
												178.5 Hf hafnium 72	180.9 Ta tantalum 73	180.9 Ta tantalum 73	183.8 W tungsten 74	186.2 Re rhenium 75	190.2 Os osmium 76	197.0 Au gold 79		
												138.9 La* lanthanum 57	138.9 La* lanthanum 57	138.9 La* lanthanum 57	138.9 La* lanthanum 57	138.9 La* lanthanum 57	138.9 La* lanthanum 57	138.9 La* lanthanum 57	138.9 La* lanthanum 57	
												140 Ce cerium 58	141 Pr praseodymium 59	141 Pr praseodymium 59	144 Nd neodymium 60	147 Pm promethium 61	150 Sm samarium 62	152 Eu europium 63	157 Gd gadolinium 64	159 Tb terbium 65
												232 Th thorium 90	231 Pa protactinium 91	231 Pa protactinium 91	238 U uranium 92	237 Np neptunium 93	242 Pu plutonium 94	243 Am americium 95	247 Cm curium 96	251 Cf californium 98
												165 Ho holmium 67	167 Er erbium 68	169 Tm thulium 69	173 Yb ytterbium 70	175 Lu lutetium 71	165 Ho holmium 67	167 Er erbium 68	169 Tm thulium 69	173 Yb ytterbium 70
												253 Fm fermium 100	254 Es einsteinium 99	254 Es einsteinium 99	254 No nobelium 102	254 No nobelium 102	253 Fm fermium 100	253 Fm fermium 100	254 No nobelium 102	254 No nobelium 102
												[272] Rg roentgenium 111	[271] Ds darmstadtium 110	[268] Mt meitnerium 109	[277] Hs hassium 108	[277] Hs hassium 108	[268] Mt meitnerium 109	[271] Ds darmstadtium 110	[272] Rg roentgenium 111	[272] Rg roentgenium 111

Elements with atomic numbers 112-116 have been reported but not fully authenticated

* Lanthanide series

* Actinide series

