

4.

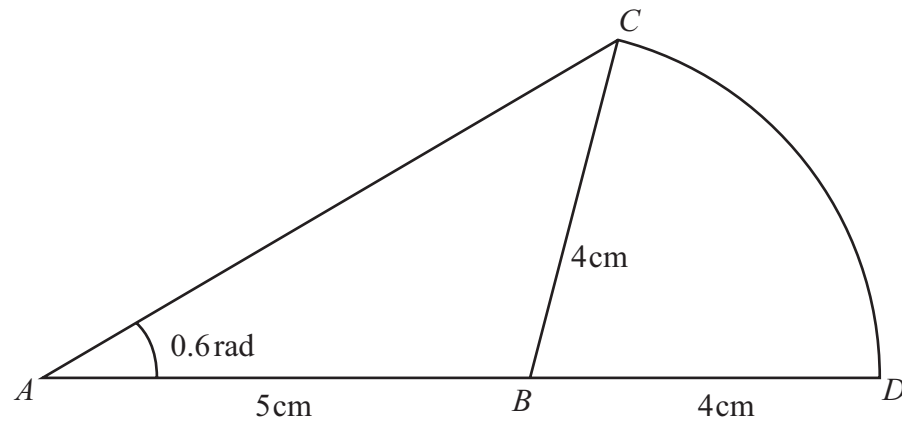


Figure 1

An emblem, as shown in Figure 1, consists of a triangle ABC joined to a sector CBD of a circle with radius 4 cm and centre B . The points A , B and D lie on a straight line with $AB = 5\text{ cm}$ and $BD = 4\text{ cm}$. Angle $BAC = 0.6$ radians and AC is the longest side of the triangle ABC .

(a) Show that angle $ABC = 1.76$ radians, correct to 3 significant figures. (4)

(b) Find the area of the emblem. (3)





Question 4 continued

Leave
blank

Lined area for writing the answer to Question 4.

Q4

(Total 7 marks)



N 3 5 1 0 1 A 0 7 2 4



6. A car was purchased for £18000 on 1st January.
On 1st January each following year, the value of the car is 80% of its value on 1st January in the previous year.

(a) Show that the value of the car exactly 3 years after it was purchased is £9216. **(1)**

The value of the car falls below £1000 for the first time n years after it was purchased.

(b) Find the value of n . **(3)**

An insurance company has a scheme to cover the maintenance of the car.
The cost is £200 for the first year, and for every following year the cost increases by 12% so that for the 3rd year the cost of the scheme is £250.88

(c) Find the cost of the scheme for the 5th year, giving your answer to the nearest penny. **(2)**

(d) Find the total cost of the insurance scheme for the first 15 years. **(3)**



Question 6 continued

Leave
blank

Lined area for writing the answer to Question 6.



7.

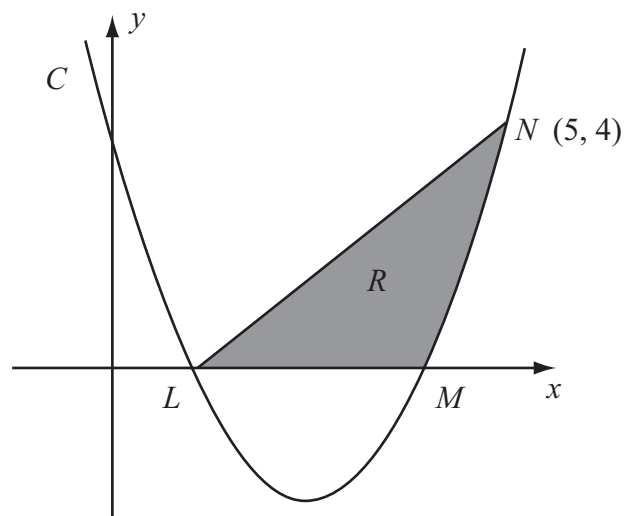


Figure 2

The curve C has equation $y = x^2 - 5x + 4$. It cuts the x -axis at the points L and M as shown in Figure 2.

- (a) Find the coordinates of the point L and the point M . (2)
- (b) Show that the point $N(5, 4)$ lies on C . (1)
- (c) Find $\int (x^2 - 5x + 4) dx$. (2)

The finite region R is bounded by LN , LM and the curve C as shown in Figure 2.

- (d) Use your answer to part (c) to find the exact value of the area of R . (5)





Question 7 continued

Leave
blank

Lined area for writing the answer to Question 7.



N 3 5 1 0 1 A 0 1 5 2 4





Question 7 continued

Leave
blank

Handwriting practice area with 33 horizontal lines.



8.

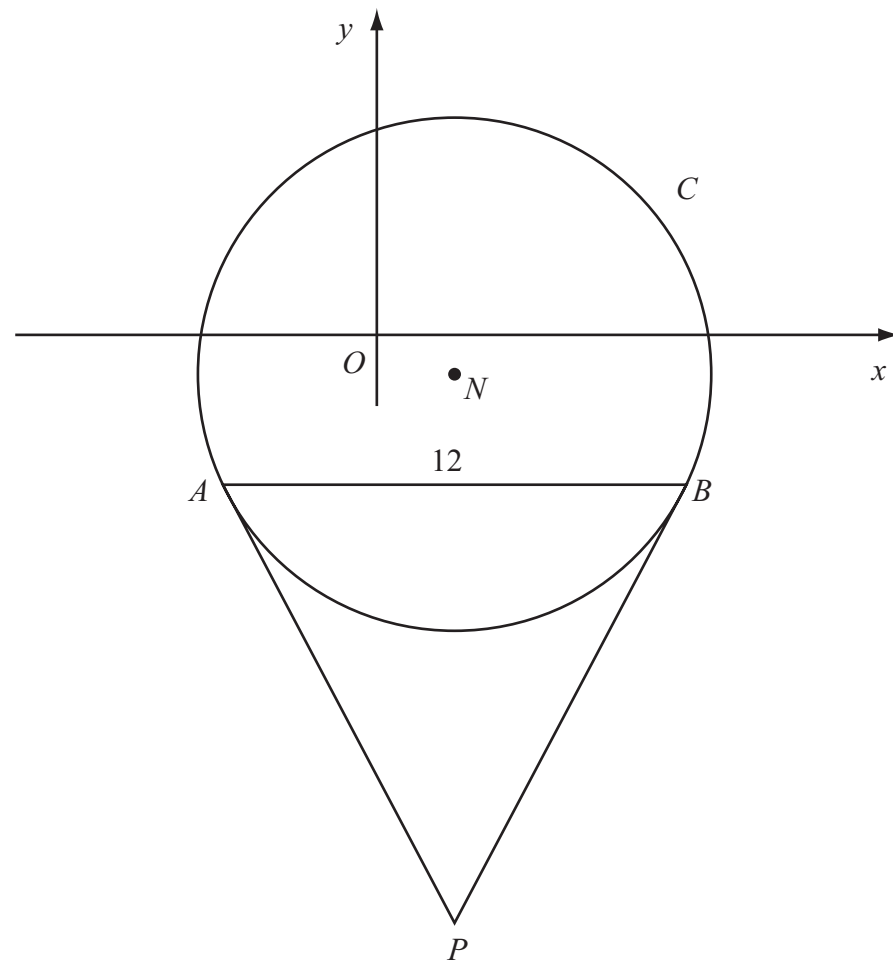


Figure 3

Figure 3 shows a sketch of the circle C with centre N and equation

$$(x - 2)^2 + (y + 1)^2 = \frac{169}{4}$$

- (a) Write down the coordinates of N . (2)
- (b) Find the radius of C . (1)

The chord AB of C is parallel to the x -axis, lies below the x -axis and is of length 12 units as shown in Figure 3.

- (c) Find the coordinates of A and the coordinates of B . (5)
- (d) Show that angle $ANB = 134.8^\circ$, to the nearest 0.1 of a degree. (2)

The tangents to C at the points A and B meet at the point P .

- (e) Find the length AP , giving your answer to 3 significant figures. (2)



Question 9 continued

Leave blank

Lined area for writing the answer to Question 9.

Q9

(Total 10 marks)

TOTAL FOR PAPER: 75 MARKS

END

