

Write your name here

Surname

Other names

Edexcel Certificate

Centre Number

Candidate Number

**Edexcel
International GCSE**

--	--	--	--	--

--	--	--	--

Chemistry

Unit: KCH0/4CH0

Science (Double Award) KSC0/4SC0

Paper: 1C

Monday 14 January 2013 – Morning

Time: 2 hours

Paper Reference

**KCH0/1C 4CH0/1C
KSC0/1C 4SC0/1C**

You must have:

Calculator
Ruler

Total Marks

Instructions

- Use **black** ink or ball-point pen.
- **Fill in the boxes** at the top of this page with your name, centre number and candidate number.
- Answer **all** questions.
- Answer the questions in the spaces provided
– *there may be more space than you need.*
- Show all the steps in any calculations and state the units.

Information

- The total mark for this paper is 120.
- The marks for **each** question are shown in brackets
– *use this as a guide as to how much time to spend on each question.*

Advice

- Read each question carefully before you start to answer it.
- Keep an eye on the time.
- Write your answers neatly and in good English.
- Try to answer every question.
- Check your answers if you have time at the end.

Turn over ►

P41538A

©2013 Pearson Education Ltd.

1/1/1/1/



PEARSON

THE PERIODIC TABLE

Period 1 2 3 4 5 6 7 0

Group

4	He Helium 2
---	-------------------

1	H Hydrogen 1
---	--------------------

1	7 Li Lithium 3	9 Be Beryllium 4	11 Na Sodium 11	12 Mg Magnesium 12	13 Al Aluminium 13	14 Si Silicon 14	15 P Phosphorus 15	16 S Sulfur 16	17 Cl Chlorine 17	18 Ar Argon 18																						
2	19 K Potassium 19	20 Ca Calcium 20	21 Sc Scandium 21	22 Ti Titanium 22	23 V Vanadium 23	24 Cr Chromium 24	25 Mn Manganese 25	26 Fe Iron 26	27 Co Cobalt 27	28 Ni Nickel 28	29 Cu Copper 29	30 Zn Zinc 30	31 Ga Gallium 31	32 Ge Germanium 32	33 As Arsenic 33	34 Se Selenium 34	35 Br Bromine 35	36 Kr Krypton 36														
3	37 Rb Rubidium 37	38 Sr Strontium 38	39 Y Yttrium 39	40 Zr Zirconium 40	41 Nb Niobium 41	42 Mo Molybdenum 42	43 Tc Technetium 43	44 Ru Ruthenium 44	45 Rh Rhodium 45	46 Pd Palladium 46	47 Ag Silver 47	48 Cd Cadmium 48	49 In Indium 49	50 Sn Tin 50	51 Sb Antimony 51	52 Te Tellurium 52	53 I Iodine 53	54 Xe Xenon 54														
4	55 Cs Caesium 55	56 Ba Barium 56	57 La Lanthanum 57	58 Ce Cerium 58	59 Pr Praseodymium 59	60 Nd Neodymium 60	61 Pm Promethium 61	62 Sm Samarium 62	63 Eu Europium 63	64 Gd Gadolinium 64	65 Tb Terbium 65	66 Dy Dysprosium 66	67 Ho Holmium 67	68 Er Erbium 68	69 Tm Thulium 69	70 Yb Ytterbium 70	71 Lu Lutetium 71	72 Hf Hafnium 72	73 Ta Tantalum 73	74 W Tungsten 74	75 Re Rhenium 75	76 Os Osmium 76	77 Ir Iridium 77	78 Pt Platinum 78	79 Au Gold 79	80 Hg Mercury 80	81 Tl Thallium 81	82 Pb Lead 82	83 Bi Bismuth 83	84 Po Polonium 84	85 At Astatine 85	86 Rn Radon 86
5	87 Fr Francium 87	88 Ra Radium 88	89 Ac Actinium 89	90 Th Thorium 90	91 Pa Protactinium 91	92 U Uranium 92	93 Np Neptunium 93	94 Pu Plutonium 94	95 Am Americium 95	96 Cm Curium 96	97 Bk Berkelium 97	98 Cf Californium 98	99 Es Einsteinium 99	100 Fm Fermium 100	101 Md Mendelevium 101	102 No Nobelium 102	103 Lr Lawrencium 103	104 Rf Rutherfordium 104	105 Db Dubnium 105	106 Sg Seaborgium 106	107 Bh Bohrium 107	108 Hs Hassium 108	109 Mt Meitnerium 109	110 Ds Darmstadtium 110	111 Rg Roentgenium 111	112 Cn Copernicium 112	113 Nh Nihonium 113	114 Fl Flerovium 114	115 Mc Moscovium 115	116 Lv Livermorium 116	117 Ts Tennessine 117	118 Og Oganesson 118

Key

Relative atomic mass
Symbol
Name
Atomic number



BLANK PAGE



Answer ALL questions.

1 This question is about the element beryllium.

(a) Use words from the box to complete the sentences about beryllium.

Each word may be used once, more than once or not at all.

(7)

electrons	negative	neutral	neutrons
nucleus	positive	protons	shells

An atom of beryllium has a central that contains particles called and Around these particles there are orbiting in

An atom of beryllium has no charge because it contains equal numbers of and

The particles with the lowest mass in an atom of beryllium are called

(b) Beryllium forms a compound with the formula $\text{Be}(\text{OH})_2$

(i) How many different elements are there in $\text{Be}(\text{OH})_2$?

(1)

(ii) What is the total number of atoms in the formula $\text{Be}(\text{OH})_2$?

(1)

(Total for Question 1 = 9 marks)



2 The halogens are elements in Group 7 of the Periodic Table.

(a) Put a cross in the box to indicate your answer.

(i) Chlorine gas is

(1)

A brown

B colourless

C green

D violet

(ii) At room temperature, the physical state of bromine is

(1)

A solid

B liquid

C gas

D aqueous solution

(b) Which is the most reactive element in Group 7?

(1)

(c) Chlorine reacts with hydrogen to form a colourless gas that dissolves in water to form an acid.

(i) What is the name of the colourless gas?

(1)

(ii) What is the name of the acid?

(1)

(iii) What is the formula that is used to represent both the colourless gas and the acid?

(1)

(Total for Question 2 = 6 marks)



3 A student found this information about hydrogen.

Robert Boyle discovered that hydrogen was produced when iron reacted with dilute acids.	Henry Cavendish found that water was formed when hydrogen burned.	Jacques Charles launched the first hydrogen-filled balloon.	James Dewar liquefied hydrogen for the first time.
1671	1781	1783	1898
Year			

(a) (i) The student repeated Boyle's experiment using iron and dilute sulfuric acid.

State **two** observations that he could have made.

(2)

1

2

(ii) Complete the word equation for this reaction.

(1)

iron + sulfuric acid → +

(b) Balance the equation for the complete combustion of hydrogen.

(1)



(c) To show that the liquid produced by burning hydrogen was pure water, a student carried out a chemical test and a physical test.

(i) The chemical test involved adding a few drops of the liquid to a sample of anhydrous copper(II) sulfate.

State the colour change observed.

(2)

Initial colour

Final colour



(ii) Place a cross ☒ in one box to show the formula of the compound formed in this chemical test. (1)

- A Cu(OH)_2
- B CuSO_4
- C $\text{CuSO}_4 \cdot \text{H}_2\text{O}$
- D $\text{CuSO}_4 \cdot 5\text{H}_2\text{O}$

(iii) The physical test involved measuring a property of the liquid.
State a suitable physical property and give the value for pure water. (2)

Physical property

Value

(d) (i) Suggest what property of hydrogen makes it suitable for filling balloons. (1)

(ii) Helium is now used instead of hydrogen to fill balloons.
State the property of helium that makes it more suitable than hydrogen for filling balloons. (1)

(e) Write an equation, including state symbols, to show the process that occurs when hydrogen is liquefied. (1)

(Total for Question 3 = 12 marks)



4 Water is needed for iron to rust.

(a) (i) State **one** other substance needed for iron to rust.

(1)

(ii) When iron rusts, a brown compound forms that can be represented by the formula Fe_2O_3

State the name of this compound.

(1)

(b) Three students decided to investigate the rusting of some iron nails. They measured the mass of each nail before placing it in some water. After rusting had occurred, the nails were removed and their masses were measured.

The table shows their results.

Student	Mass of nail before rusting in g	Mass of nail after rusting in g
A	3.0	3.3
B	1.5	1.7
C	1.8	1.7

(i) Suggest **one** problem in measuring the mass of a nail after rusting.

(1)

(ii) Student **A** thought that the results showed that his nail had rusted most.

Suggest why he thought this.

(1)

(iii) Student **B** thought that the results showed that her nail had rusted most.

Suggest why she thought this.

(1)



(iv) How do the results of Student C show that he must have made an error in his experiment?

(1)

.....

.....

(c) Most methods used to prevent iron objects from rusting use a physical barrier. This involves covering the iron object with another substance to keep out the water.

Complete the table by choosing words from the box to suggest the substance that should be used to prevent each named iron object from rusting.

(2)

aluminium	grease	oil	paint	plastic
------------------	---------------	------------	--------------	----------------

Iron object	Substance used to prevent rusting
bicycle chain	
railway bridge	

(d) Some iron objects are coated with zinc to prevent rusting. The zinc initially acts as a physical barrier, but an extra advantage of using zinc is that it continues to prevent rusting even if the layer of zinc is damaged.

State the name of this type of rust prevention and explain how it works.

(3)

.....

.....

.....

.....

.....

.....

.....

.....

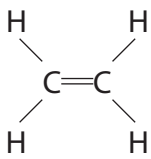
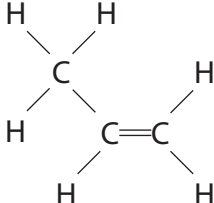
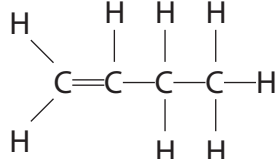
.....

.....

(Total for Question 4 = 11 marks)



5 The table shows the displayed formulae of three unsaturated hydrocarbons.

		
Compound A	Compound B	Compound C

(a) Explain the meaning of the term **hydrocarbon**.

(2)

.....

.....

.....

(b) Explain the meaning of the term **unsaturated**.

(1)

.....

.....

(c) Compounds **A**, **B** and **C** belong to the same homologous series. One characteristic of the compounds in a homologous series is that they have the same general formula.

(i) State the name of this homologous series.

(1)

.....

(ii) State the general formula of this homologous series.

(1)

.....

(iii) State **two** other characteristics of the compounds in a homologous series.

(2)

1

.....

2

.....



(d) Compound **C** has several isomers.

(i) What is the name of compound **C**? (1)

(ii) What is the molecular formula of compound **C**? (1)

(iii) Explain the meaning of the term **isomers**. (2)


(iv) Draw the displayed formula of an isomer of compound **C**. (1)

(e) Bromine water can be used to distinguish compound **A** from ethane.

(i) Complete the sentence to show the colour change when compound **A** is bubbled through bromine water. (1)

Bromine water changes from orange to

(ii) Complete the chemical equation for the reaction between compound **A** and bromine water. (1)



(Total for Question 5 = 14 marks)



BLANK PAGE



6 The reactivity of metals can be studied using displacement reactions. In these reactions, one metal is added to a solution of a salt of a different metal.

If a displacement reaction occurs, there is a temperature rise.

A student used the following method in a series of experiments.

- Pour some metal salt solution into a polystyrene cup supported in a glass beaker and record the temperature of the solution.
- Add a known mass of a metal and stir.
- Record the maximum temperature of the mixture.

(a) Suggest **three** variables that should be kept the same for the student's experiments to be a fair test.

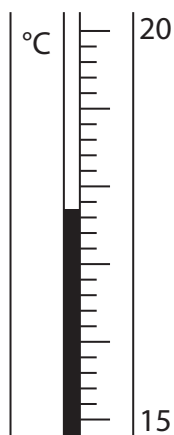
(3)

1

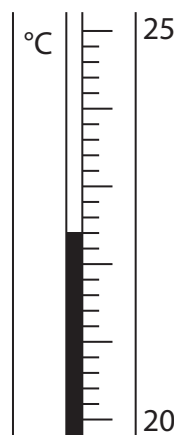
2

3

(b) The student used a thermometer to measure the temperature rise. The diagrams show the thermometer readings before and after adding the metal.



before adding metal



after adding metal

Use the diagrams to complete the table.

(3)

Temperature after adding the metal in °C	
Temperature before adding the metal in °C	
Temperature change in °C	



(c) The student used copper(II) sulfate solution in all her experiments. She used five different metals. She did not know the identity of the metal labelled **X**.

The student did each experiment twice. The table shows her results.

Metal	Temperature rise in °C		Average temperature rise in °C
	Run 1	Run 2	
magnesium	10.5	15.5	13.0
silver	0.0	0.0	0.0
iron	3.5	4.5	4.0
X	0.0	0.0	0.0
zinc	8.0	9.0	8.5

(i) Which of the metals gave the least reliable temperature rise?

Explain your choice.

(2)

Metal

Explanation

.....

.....

(ii) Identify the most reactive of the metals used.

Explain how the results show that it is the most reactive.

(2)

Metal

Explanation

.....

.....

(iii) Why is there no temperature rise when silver is added to copper(II) sulfate solution?

(1)

.....

.....

.....



(iv) Why do the results make it impossible to decide which of the metals is the least reactive?

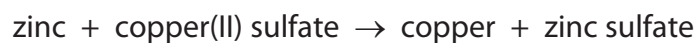
(1)

.....

.....

.....

(d) A word equation for one of the reactions is



Write a chemical equation for this reaction.

(1)

.....

(Total for Question 6 = 13 marks)

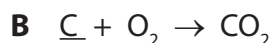
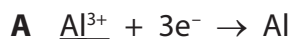


BLANK PAGE



7 Most metals are extracted in a blast furnace or by electrolysis.

(a) (i) The chemical equations for two reactions that occur during the extraction of aluminium are



For each of these reactions, complete the table to show whether the underlined species is being oxidised or reduced. In each case, explain your choice.

(3)

Reaction	Species oxidised or reduced	Explanation of choice
A		
B		

(ii) Reaction **A** takes place at the negative electrode during the extraction of aluminium.

Write an ionic half-equation for the reaction at the positive electrode.

(2)

(iii) Reaction **B** gives a waste product during the extraction of aluminium.

What effect does this reaction have on the positive electrodes?

(1)

(iv) Reaction **B** is also important in the extraction of iron in a blast furnace.

Name the raw material that reacts with oxygen and state why the reaction is important.

(2)

Raw material


Importance of reaction




(b) Galena (PbS) and cerussite (PbCO₃) are two ores of lead. A mining company is considering which of these two ores to use for the extraction of lead.

The equations for the reactions occurring are

Process using galena:



Process using cerussite:



(i) Both processes form carbon dioxide, which the mining company hopes to sell.

Complete the table to show **two** uses of carbon dioxide and a property on which each use depends.

(4)

Use	Property

(ii) One disadvantage of using galena is that the sulfur dioxide produced can cause acid rain.

Write a chemical equation to show the formation of an acidic solution from sulfur dioxide and state one effect of acid rain.

(2)

Equation

Effect

.....



(c) The company uses a sample of cerussite containing 500 g of PbCO_3

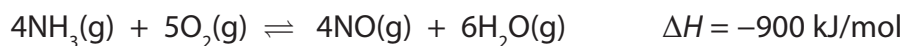
Calculate the maximum mass of lead that can be obtained from this sample of cerussite.
(3)

Mass of lead = g

(Total for Question 7 = 17 marks)



8 The equation for a reaction that occurs in the manufacture of nitric acid is



(a) (i) State the meanings of the symbols \rightleftharpoons and ΔH .

(2)

\rightleftharpoons


ΔH

(ii) What does the negative sign of ΔH indicate about the reaction?

(1)

(b) Complete the energy level diagram for this reaction.

(2)



(c) Typical conditions used for this reaction are a temperature of 900 °C and a pressure of 10 atmospheres.

Deduce the effects of changing the conditions as shown in the table. Choose from the words **increased**, **decreased** or **unchanged** to complete the table.

(4)

Change	Effect on rate of reaction	Effect on yield of products
increase in temperature		
addition of catalyst		



(d) A manufacturer considers using a pressure of 5 atm instead of 10 atm.

(i) Predict and explain the effect on the rate of reaction of changing the pressure to 5 atm.

(3)

Effect on rate of reaction

Explanation

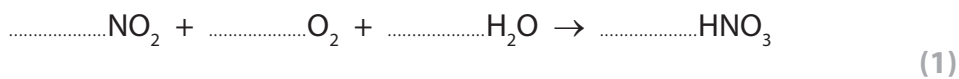
(ii) Predict and explain the effect on the position of equilibrium of changing the pressure to 5 atm.

(2)

Effect on position of equilibrium

Explanation

(e) Balance the equation that represents the last stage in the manufacture of nitric acid.



(Total for Question 8 = 15 marks)



9 This question is about bromine and some of its compounds.

(a) Atoms of bromine can be represented as ^{79}Br and ^{81}Br

(i) State the number of protons, neutrons and electrons in an atom of ^{79}Br (2)

Protons

Neutrons

Electrons

(ii) What name is used for atoms of bromine that have different numbers of neutrons? (1)

(iii) Why do all atoms of bromine have the same chemical properties? (1)

(iv) The relative atomic mass of bromine is given in the Periodic Table as 80, but a more accurate value is 79.9

Suggest, with a reason, which of the atoms ^{79}Br and ^{81}Br exists in greater numbers in a sample of bromine. (2)



(b) Hydrogen bromide (HBr) and sodium bromide (NaBr) are compounds of bromine.

(i) Draw a dot and cross diagram to represent a hydrogen bromide molecule.

Show only the outer electrons in each atom.

(2)

(ii) Explain how the atoms are held together in a hydrogen bromide molecule.

(2)

.....

.....

.....

(iii) Explain why sodium bromide has a higher melting point than hydrogen bromide.

(3)

.....

.....

.....

.....

.....

.....

.....

(c) A compound has the percentage composition 13.8% sodium, 47.9% bromine and 38.3% oxygen by mass.

Calculate its empirical formula.

(3)

Empirical formula =

(Total for Question 9 = 16 marks)

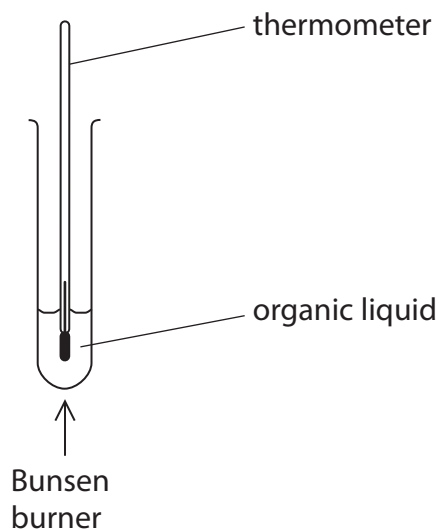


BLANK PAGE



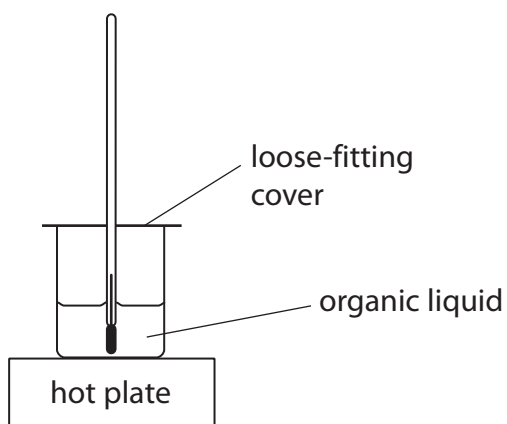
10 A teacher discussed with her students whether the boiling points of organic compounds are related to the size of their molecules.

The students suggested measuring the boiling points of some organic compounds using this apparatus.



(a) The teacher said that their suggested method was too dangerous.

She recommended using the apparatus shown below instead.



Suggest **one** reason why this apparatus is better than the students' suggestion.

(1)

.....

.....



(b) The students used the apparatus recommended by the teacher to measure the boiling points of five alcohols.

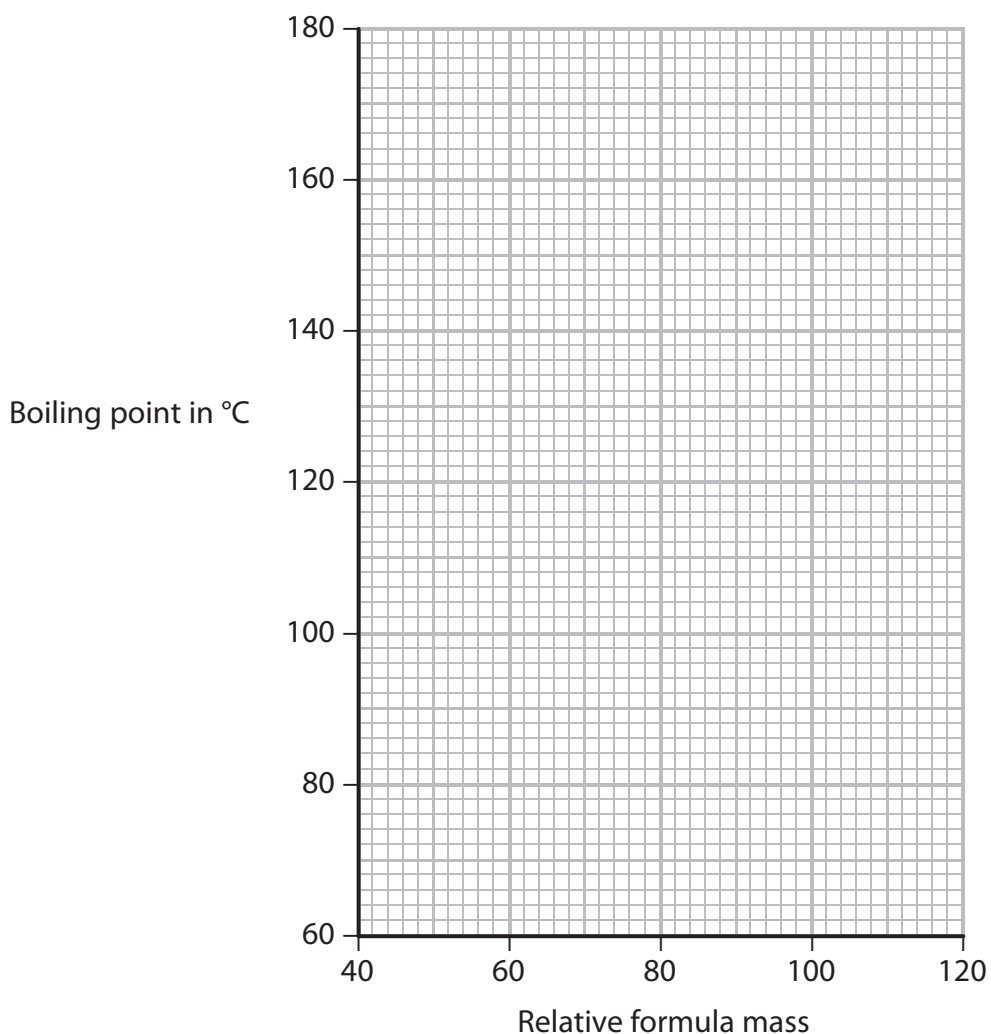
Their results are shown in the table.

	Alcohol				
	A	B	C	D	E
Boiling point in °C	78	96	138	157	176
Relative formula mass	46	60	88	102	116

(i) Plot a graph of the data in the table on the grid.

Draw a straight line of best fit through the points.

(3)



(ii) Describe the relationship shown by your graph.

(1)

(iii) Use your graph to predict the boiling point of the alcohol that has a relative formula mass of 74.

(1)

(iv) Which of the alcohols **A, B, C, D** or **E** is the least volatile?

(1)

(Total for Question 10 = 7 marks)

(TOTAL FOR PAPER = 120 MARKS)



BLANK PAGE

