

# Photosynthesis

## Question Paper 1

<b>Level</b>	GCSE (9-1)
<b>Subject</b>	Biology
<b>Exam Board</b>	AQA
<b>Topic</b>	4.4 Bioenergetics
<b>Sub-Topic</b>	Photosynthesis
<b>Difficulty Level</b>	Gold Level
<b>Booklet</b>	Question Paper 1

**Time Allowed:** 53 minutes

**Score:** /53

**Percentage:** /100

# Save My Exams! – The Home of Revision

For more awesome GCSE and A level resources, visit us at [www.savemyexams.co.uk](http://www.savemyexams.co.uk)

**Q1.** Green plants can make glucose.

(a) Plants need energy to make glucose.

How do plants get this energy?

.....  
.....  
.....  
.....

(2)

(b) Plants can use the glucose they have made to supply them with energy.

Give **four** other ways in which plants use the glucose they have made.

.....  
.....  
.....  
.....  
.....  
.....  
.....  
.....

(4)

(Total 6 marks)

## Save My Exams! – The Home of Revision

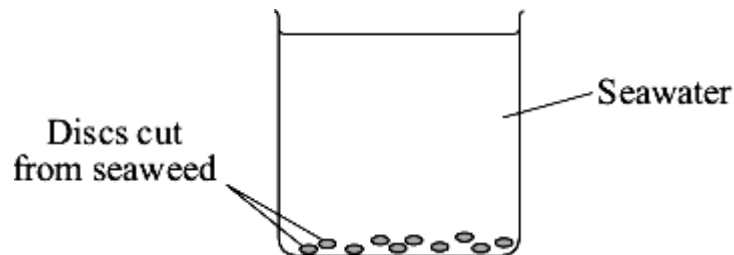
For more awesome GCSE and A level resources, visit us at [www.savemyexams.co.uk](http://www.savemyexams.co.uk)

- Q2.** The diagram shows where three seaweeds live on a seashore. As the tide moves in and out, these seaweeds are covered with seawater for different lengths of time.



Some students investigated the rate of photosynthesis in these seaweeds.

- They cut ten small discs from one seaweed.
- They dropped the discs into seawater in a beaker.
- They recorded the time taken for the fifth disc to float to the surface.
- They repeated this experiment with the other two seaweeds.



- (a) (i) Suggest why the discs floated to the surface.

.....  
.....

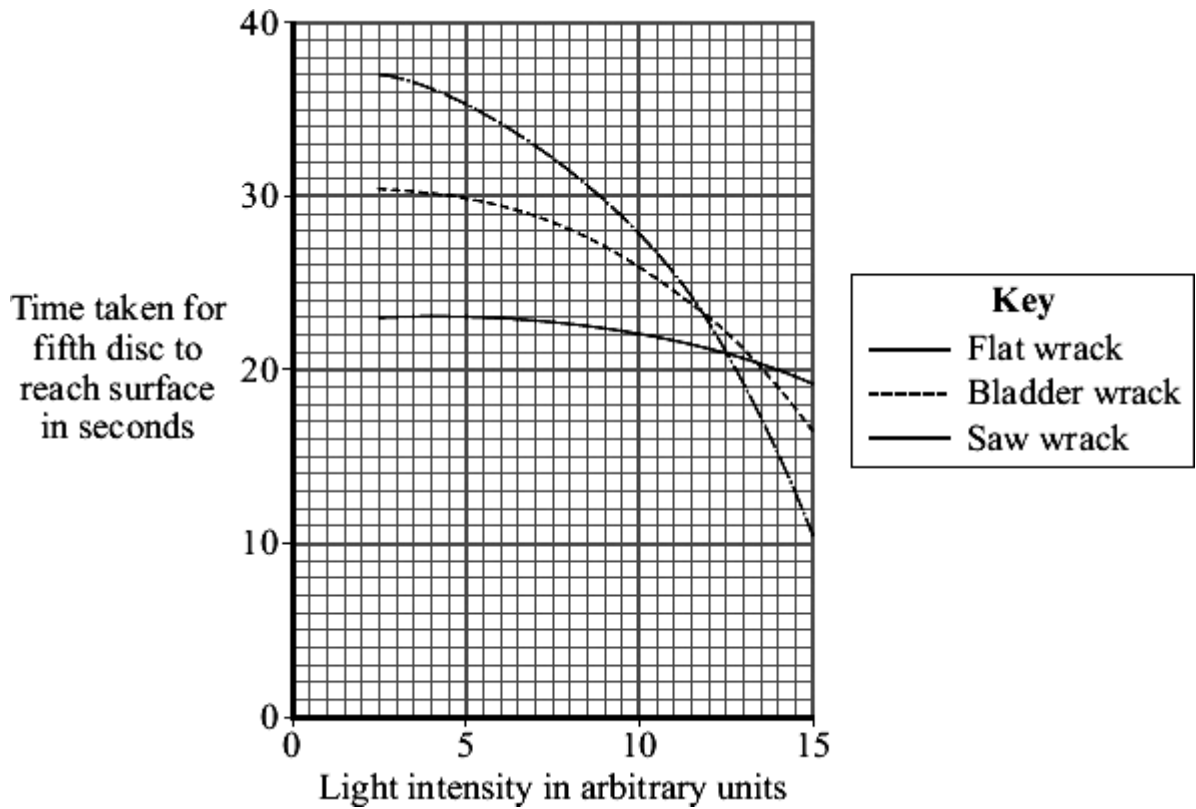
(1)

- (ii) Suggest the advantage of recording the time taken for the fifth disc to reach the surface, rather than for the tenth disc.

.....  
.....

(1)

- (b) The students carried out their experiments at different light intensities. The graph shows the results they collected.



- (i) Compare the rate of photosynthesis for flat wrack with the rate for saw wrack at different light intensities.

.....

.....

.....

.....

(2)

- (ii) Seawater absorbs light.

The growth rate of saw wrack is less than the growth rate of bladder wrack.

Suggest why.

.....

.....

.....

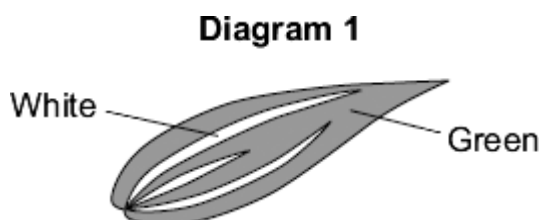
.....

(2)

(Total 6 marks)

- Q3.** Students investigated the effect of changing the carbon dioxide concentration on the rate of photosynthesis in pieces of leaf.

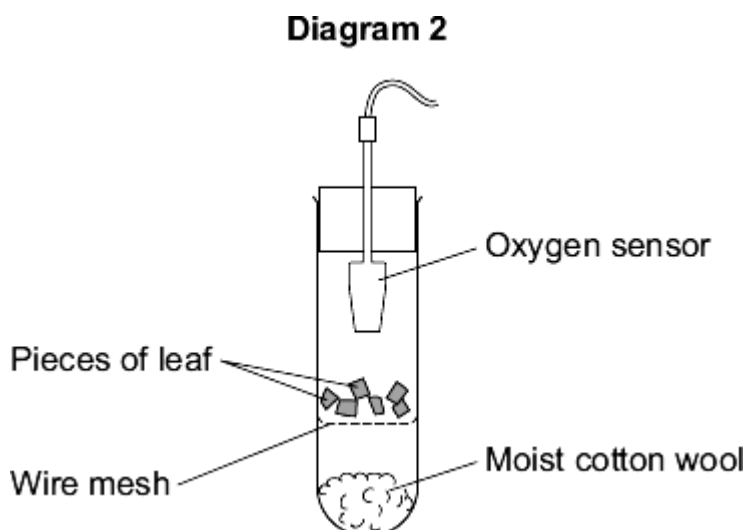
**Diagram 1** shows the type of leaf used by the students.



The students:

- cut pieces of leaf from the green region
- put the pieces into tubes
- added different concentrations of carbon dioxide to each tube
- shone lights on the tubes with either high or low light intensity
- recorded the concentration of oxygen in the tubes after 5 hours.

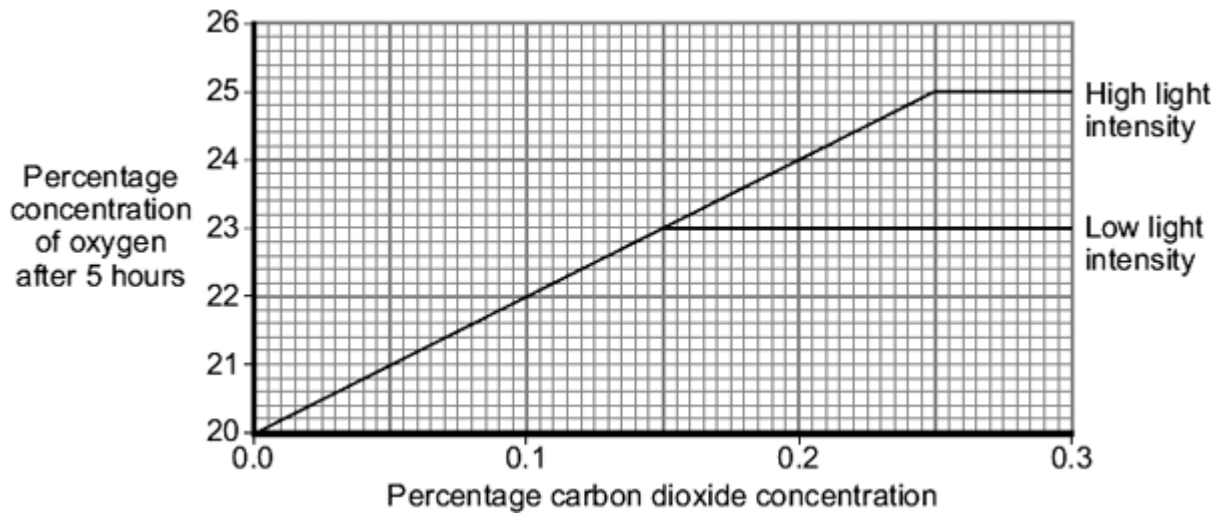
**Diagram 2** shows how each experiment was set up.



The graph shows the results of the investigation.

# Save My Exams! – The Home of Revision

For more awesome GCSE and A level resources, visit us at [www.savemyexams.co.uk](http://www.savemyexams.co.uk)



- (a) (i) Describe the effect of increasing carbon dioxide concentration on the rate of photosynthesis at low light intensity.

.....  
 .....

(1)

- (ii) Explain the effect that you have described.

In your answer you should refer to limiting factors.

.....  
 .....

(2)

- (b) What would have been the effect on oxygen concentration over the five-hour period if a white region of the leaf had been used, instead of a green region?

Effect .....

Explain your answer.

Explanation .....

.....  
 .....

## Save My Exams! – The Home of Revision

For more awesome GCSE and A level resources, visit us at [www.savemyexams.co.uk](http://www.savemyexams.co.uk)

(2)

- (c) Some people keep indoor plants which have variegated leaves (leaves with green and white regions).

If plants with variegated leaves are kept in dim light conditions the white areas of the leaves start to turn green.

This is an advantage to the plant.

Suggest why.

.....

.....

.....

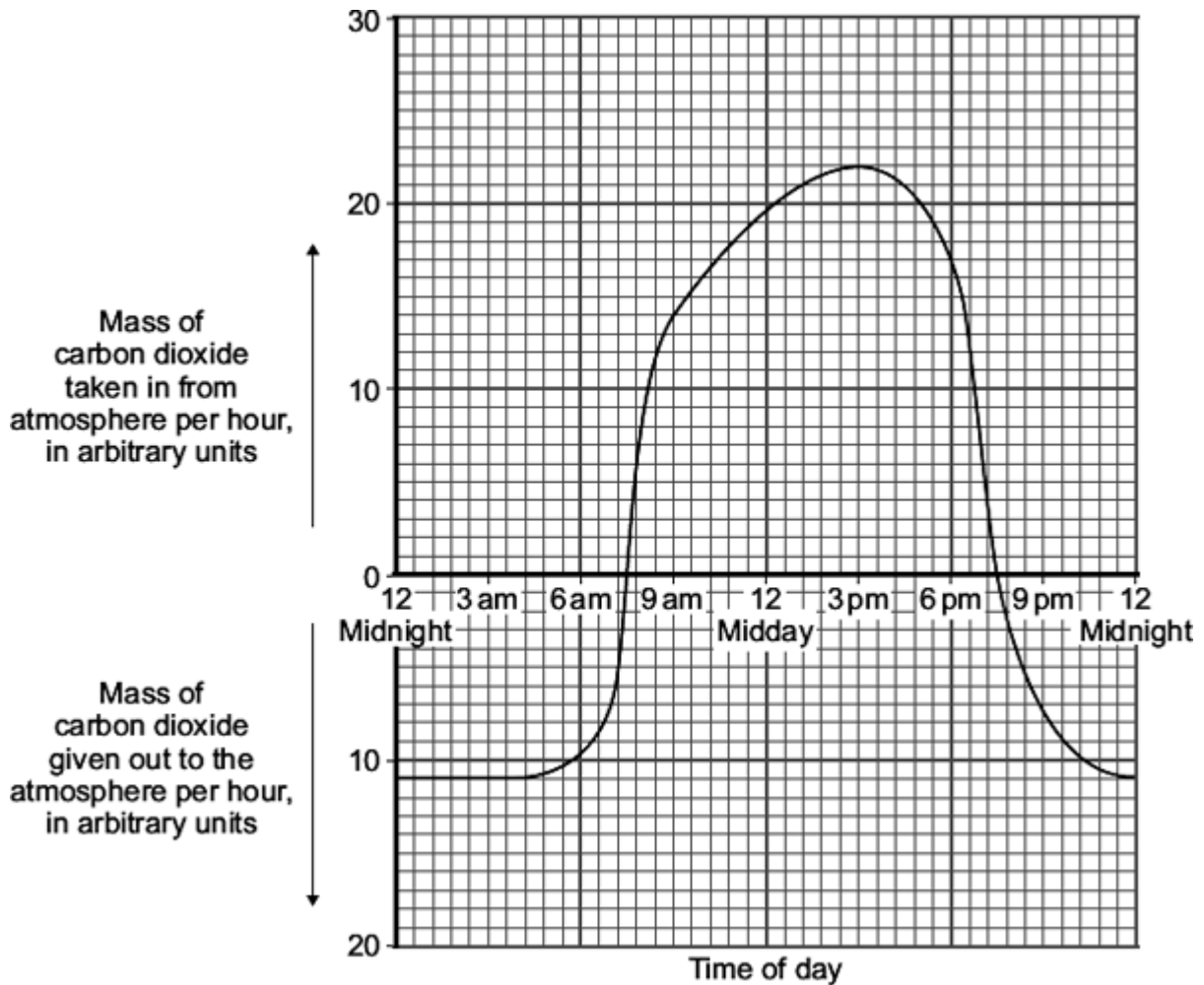
.....

(2)  
(Total 7 marks)

# Save My Exams! – The Home of Revision

For more awesome GCSE and A level resources, visit us at [www.savemyexams.co.uk](http://www.savemyexams.co.uk)

**Q4.** The graph shows the uptake of carbon dioxide and the release of carbon dioxide by a bean plant on a hot summer's day.



(a) At which **two** times in the day did the rate of photosynthesis exactly match the rate of respiration in the bean plant?

1 ..... 2 .....

(1)

(b) The bean plant respire at the same rate all through the 24 hour period.

(i) How much carbon dioxide is released each hour during respiration?

..... arbitrary units

(1)

(ii) How much carbon dioxide is used by photosynthesis in the hour beginning at 3 pm?



## Save My Exams! – The Home of Revision

For more awesome GCSE and A level resources, visit us at [www.savemyexams.co.uk](http://www.savemyexams.co.uk)

.....  
.....

Answer = ..... arbitrary units

(1)

- (c) Over the 24 hour period, the total amount of carbon dioxide taken in by the bean plant was greater than the total amount of carbon dioxide given out by the bean plant.

Explain, in detail, why this was important for the bean plant.

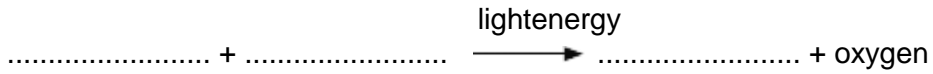
.....  
.....  
.....  
.....  
.....  
.....

(2)  
(Total 5 marks)

# Save My Exams! – The Home of Revision

For more awesome GCSE and A level resources, visit us at [www.savemyexams.co.uk](http://www.savemyexams.co.uk)

**Q5.** (a) Complete the equation for photosynthesis.



(2)

(b) Scientists investigated how temperature affects the rate of photosynthesis. The scientists grew some orange trees in a greenhouse. They used discs cut from the leaves of the young orange trees.

The scientists used the rate of oxygen production by the leaf discs to show the rate of photosynthesis.

(i) The leaf discs did not produce any oxygen in the dark.

Why?

.....  
.....

(1)

(ii) The leaf discs took in oxygen in the dark.

Explain why.

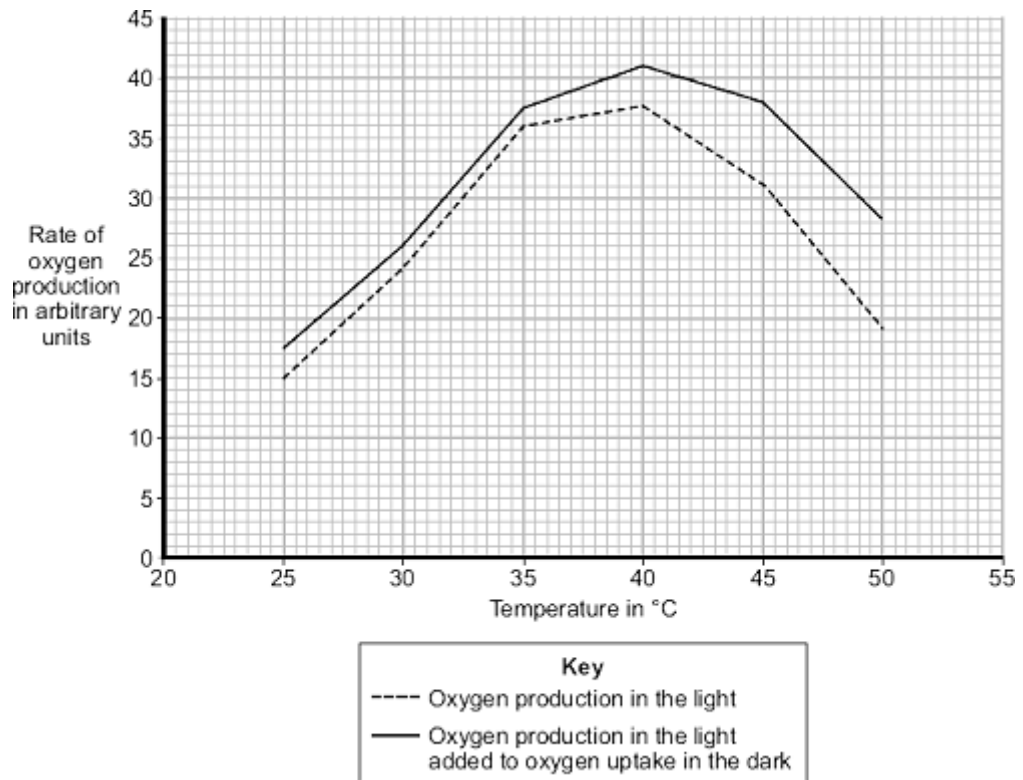
.....  
.....  
.....  
.....

(2)

(c) In their investigation, the scientists measured the rate of oxygen release by the leaf discs in the light. The scientists then measured the rate of oxygen uptake by the leaf discs in the dark.

The graph shows the effect of temperature on

- oxygen production in the light
- oxygen production in the light added to oxygen uptake in the dark.



Use the information from the graph to answer each of the following questions.

- (i) Describe the effect of temperature on oxygen production in the light.

.....

.....

.....

.....

(2)

- (ii) Explain the effect of temperature on oxygen production in the light when the temperature is increased:

from 25 °C to 35 °C

.....

.....

.....

from 40 °C to 50 °C.

## Save My Exams! – The Home of Revision

For more awesome GCSE and A level resources, visit us at [www.savemyexams.co.uk](http://www.savemyexams.co.uk)

.....  
.....  
.....

(2)

- (d) A farmer in the UK wants to grow orange trees in a greenhouse. He wants to sell the oranges he produces at a local market.  
He decides to heat the greenhouse to 35 °C.

Explain why he should **not** heat the greenhouse to a temperature higher than 35 °C.  
Use information from the graph in your answer.

.....  
.....  
.....  
.....  
.....  
.....  
.....  
.....  
.....

(3)

(Total 12 marks)

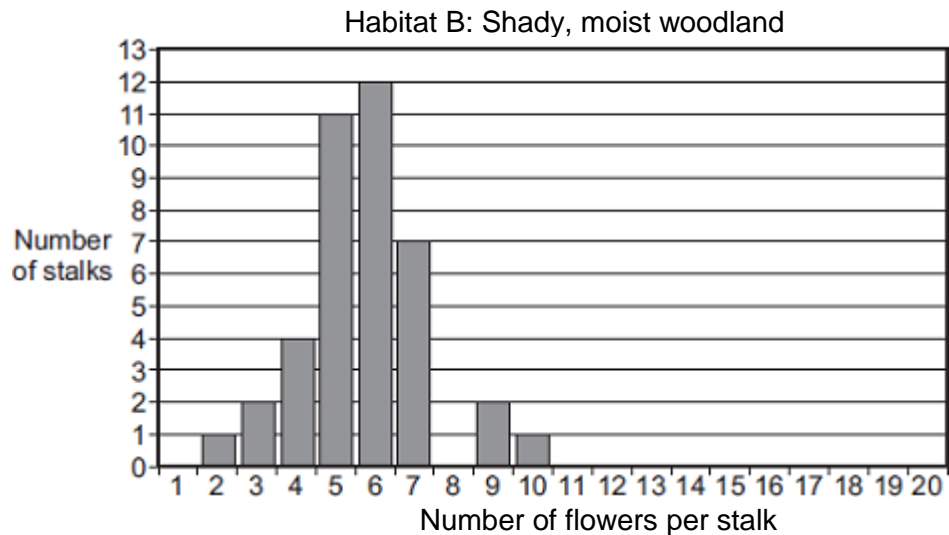
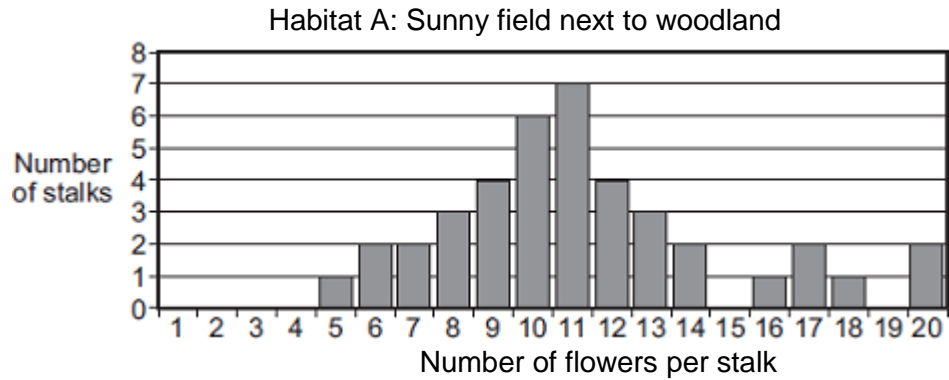
For more awesome GCSE and A level resources, visit us at [www.savemyexams.co.uk](http://www.savemyexams.co.uk)

**Q6.** Some students studied bluebell plants growing in two different habitats.

Habitat **A** was a sunny field next to woodland.

Habitat **B** was a shady, moist woodland.

A bluebell plant can have several flowers on one flower stalk. The students counted the number of flowers on each of 40 bluebell flower stalks growing in each habitat. The bar charts show the results.



- (a) The students wanted to collect valid data.  
Describe how the students should have sampled the bluebell plants at each habitat to collect valid data.

.....

.....

.....

.....

.....

(2)

## Save My Exams! – The Home of Revision

For more awesome GCSE and A level resources, visit us at [www.savemyexams.co.uk](http://www.savemyexams.co.uk)

- (b) (i) The students used the bar charts to find the mode for the number of flowers per stalk in the two habitats.

The mode for the number of flowers per stalk in habitat **A** was 11.

What was the mode for the number of flowers per stalk in habitat **B**?

Mode = .....

(1)

- (ii) The students suggested the following hypothesis:

‘The difference in the modes is due to the plants receiving different amounts of sunlight.’

Suggest why.

.....  
.....  
.....  
.....

(2)

- (iii) Suggest how the students could test their hypothesis for the two habitats.

.....  
.....  
.....  
.....

(2)

- (c) Suggest how receiving more sunlight could result in the plants producing more flowers per stalk.

.....  
.....  
.....  
.....



## Save My Exams! – The Home of Revision

For more awesome GCSE and A level resources, visit us at [www.savemyexams.co.uk](http://www.savemyexams.co.uk)

.....

(5)  
(Total 8 marks)