

Proteins & Water

Question Paper 3

Level	International A Level
Subject	Biology
Exam Board	CIE
Topic	Biological Molecules
Sub Topic	Proteins & Water
Booklet	Theory
Paper Type	Question Paper 3

Time Allowed : 53 minutes

Score : / 44

Percentage : /100

Grade Boundaries:

A*	A	B	C	D	E	U
>85%	'77.5%	70%	62.5%	57.5%	45%	<45%

- 1 Collagen is found in the extracellular matrix of muscles, tendons, ligaments and bones. Fibroblast cells in these tissues make collagen by synthesising polypeptides that form molecules with a triple helix shape. These are secreted from fibroblasts into the extracellular matrix where enzymes assemble them into collagen fibres.

Fig. 4.1 is a diagram summarising these events.

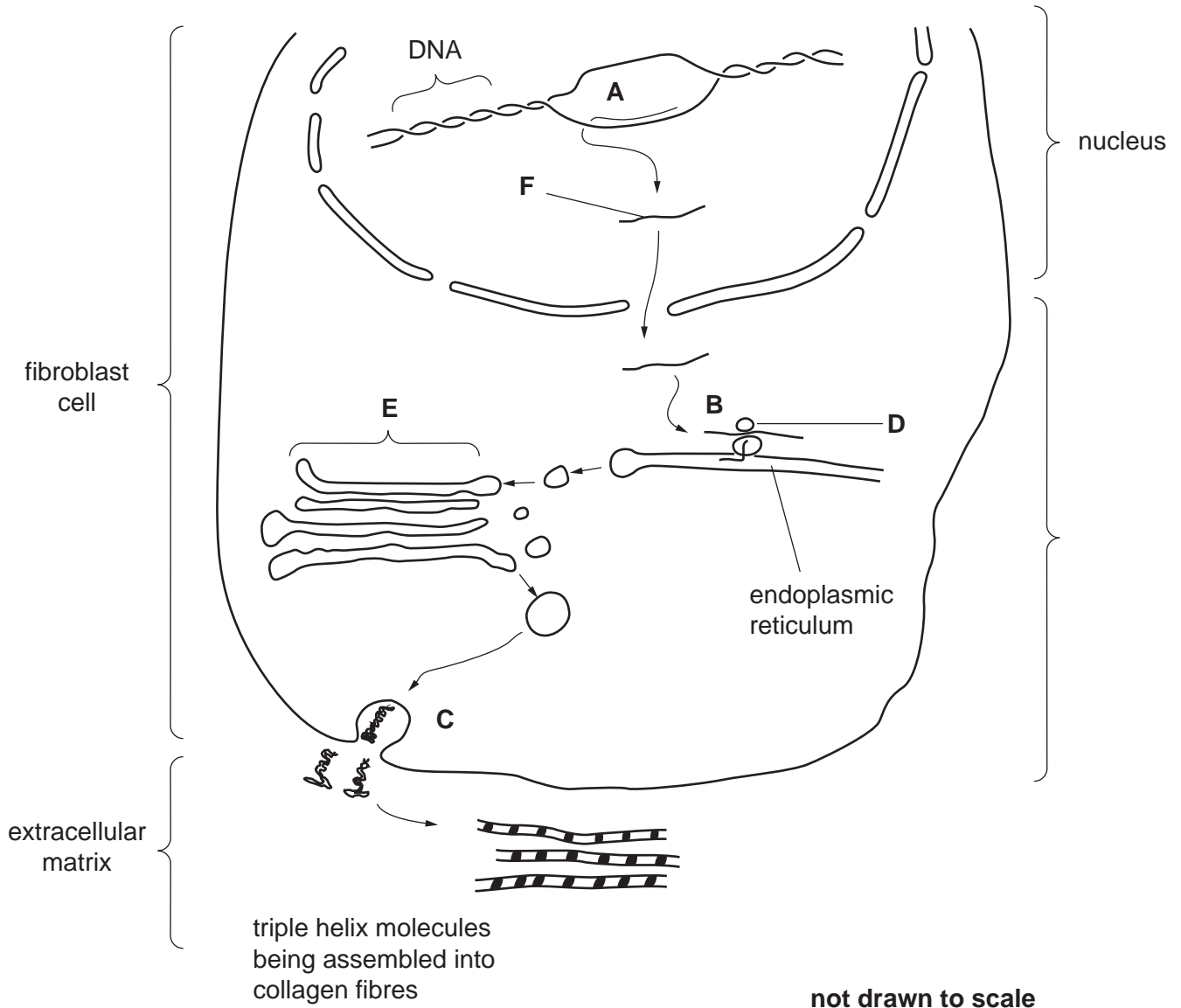


Fig. 4.1

- (a) (i) Name the processes occurring at A, B and C.

A

B

C [3]

(ii) Name structures **D** and **E**.

D

E [2]

(iii) Name molecule **F**.

F [1]

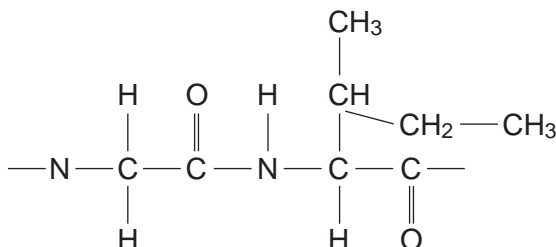
Collagen is continuously broken down in the extracellular matrix by the enzyme collagenase, which catalyses the hydrolysis of the peptide bond between the amino acids glycine and isoleucine.

(b) Suggest how collagenase is only able to act on the peptide bond between glycine and isoleucine and not on peptide bonds between any other amino acids.

.....

 [2]

(c) Draw a diagram below to show how the peptide bond between glycine and isoleucine is broken by hydrolysis including the product or products.



2 In mammals, oxygen is transported by red blood cells in a system that is described as a closed double circulation. The majority of oxygen molecules are transported as oxyhaemoglobin. At the respiring tissues, oxygen dissociates from haemoglobin and diffuses to the surrounding cells.

(a) Explain what is meant by a *closed double circulation*.

.....

.....

.....

.....

..... [2]

(b) Fig. 3.1 is a diagram that highlights the tertiary and quaternary structure of a haemoglobin molecule.

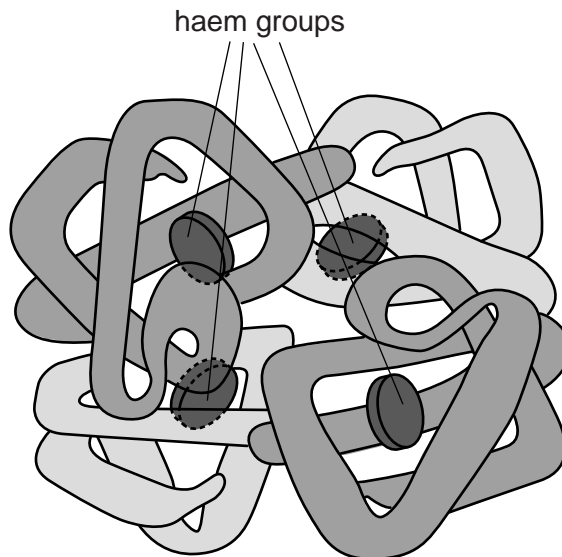


Fig. 3.1

- (c) At high altitudes, the partial pressure of inspired oxygen is considerably lower than at sea level. This means that the partial pressure of oxygen in the blood is also much lower at high altitudes than at sea level.

Fig. 3.2 is an oxygen dissociation curve of adult oxyhaemoglobin.

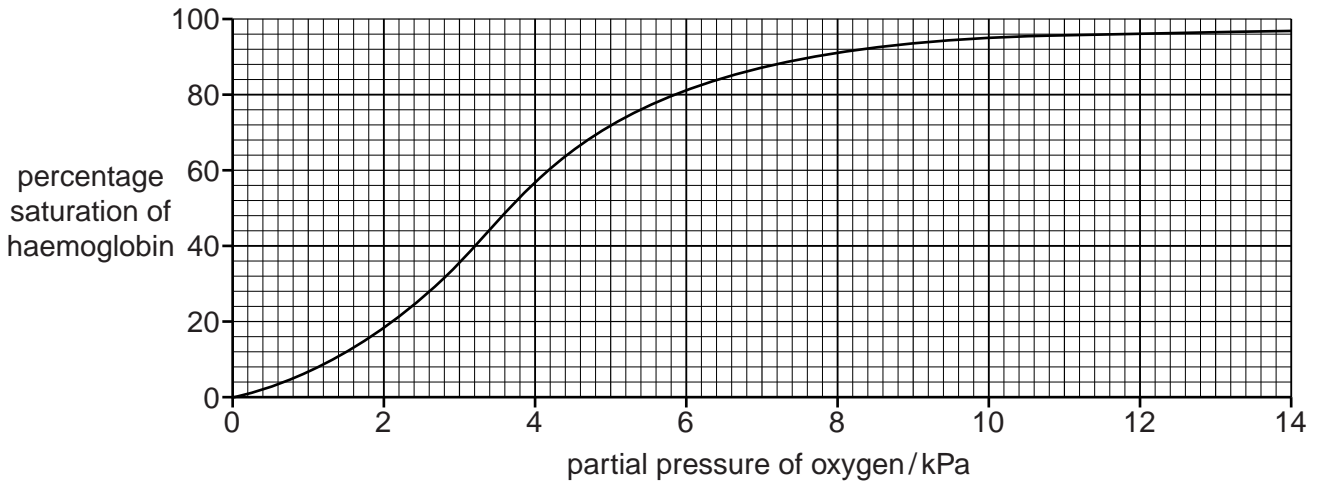


Fig. 3.2

With reference to Fig. 3.2, calculate the difference in percentage saturation of haemoglobin at sea level, where the partial pressure of oxygen is 13.0 kPa, and at a higher altitude, where the partial pressure of oxygen is 6.2 kPa.

Show your working.

answer % [2]

- (d) After spending time at altitude, a person can become acclimatised. One feature of acclimatisation is an increase in the red blood cell count.

Explain the importance of the increase in the red blood cell count.

.....

.....

.....

.....

..... [2]

3 Fig. 1.1 is a diagram of an antibody molecule.

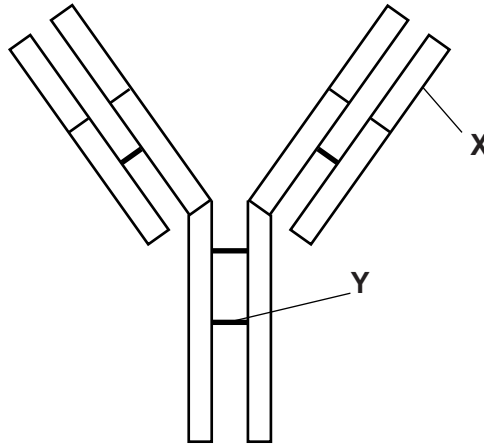


Fig. 1.1

(a) (i) Name the part labelled X.

..... [1]

(ii) Name the bond labelled Y.

..... [1]

(iii) The antibody molecule in Fig. 1.1 has quaternary structure.

Explain the meaning of the term *quaternary structure* as applied to proteins.

.....
.....
..... [1]

- 4 Green fluorescent protein (GFP) is a small protein that emits bright green fluorescence in blue light. It was first isolated from the jellyfish, *Aequorea victoria*.

The gene coding for GFP can be expressed in bacteria, such as *Escherichia coli*, and so it is often used as a marker to show successful uptake of a gene by the bacterium.

- (a) (i) Outline how a gene from another species can be inserted into *E. coli*.

.....
.....
.....
.....
.....
.....
.....
.....
.....[3]

- (ii) Explain how a marker gene, such as the gene for GFP, is used to show successful uptake of a gene for a wanted protein.

.....
.....
.....
.....
.....
.....
.....
.....
.....[3]

- (b) Genes for enzymes that produce fluorescent substances are often used as markers in gene technology.

GFP is **not** an enzyme.

Suggest **one** disadvantage of using the gene for GFP to produce easily detectable fluorescence, rather than using a gene for an enzyme that produces a fluorescent substance.

Explain your answer.

disadvantage

.....

explanation

.....

.....

..... [2]

[Total: 8]