

Periodicity & Trends

Question Paper 1

Level	International A Level
Subject	Chemistry
Exam Board	Edexcel
Topic	The Core Principles of Chemistry
Sub Topic	Periodicity & Trends
Booklet	Question Paper 1

Time Allowed: 76 minutes

Score: /63

Percentage: /100

Grade Boundaries:

A*	A	B	C	D	E	U
>85%	77.5%	70%	62.5%	57.5%	45%	<45%

1 Which of these elements in Period 3 has the highest melting temperature?

- A Na
- B Al
- C Si
- D P

(Total for Question 1 = 1 mark)

2 The first six ionization energies, in kJ mol^{-1} , of an element are

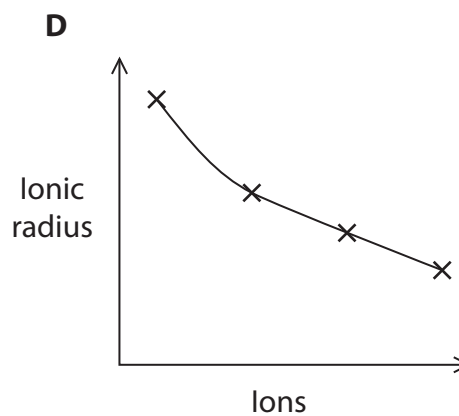
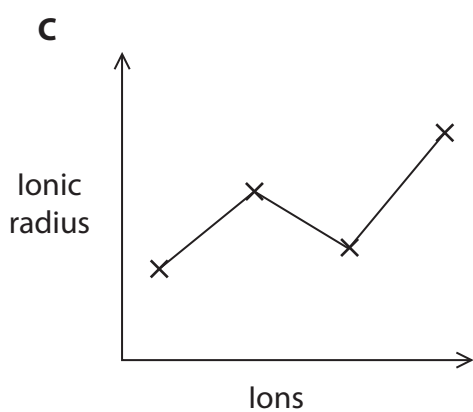
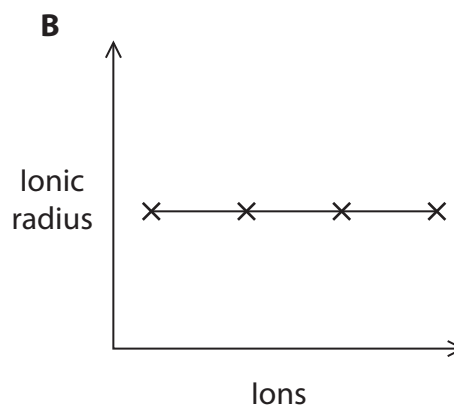
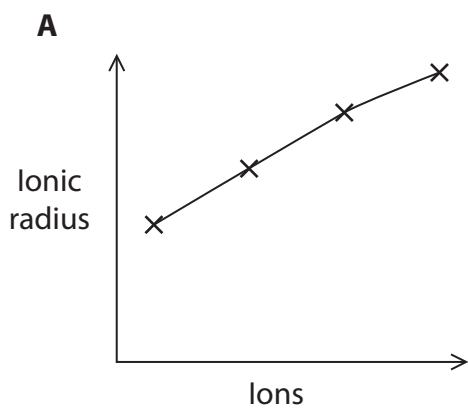
1086, 2353, 4621, 6223, 37832, 47278

In which group of the Periodic Table is this element?

- A 2
- B 3
- C 4
- D 5

(Total for Question 2 = 1 mark)

- 3 Each diagram shows the trend in the ionic radius for four sequences of ions. The diagrams are not to scale.



- (a) Which diagram shows the trend in the ionic radius for the sequence Li^+ , Na^+ , K^+ , Rb^+ ?

(1)

- A
- B
- C
- D

- (b) Which diagram shows the trend in the ionic radius for the sequence Na^+ , Mg^{2+} , Al^{3+} , Si^{4+} ?

(1)

- A
- B
- C
- D

(Total for Question 3 = 2 marks)

4 The atomic radius of potassium is larger than that of sodium because potassium has

- A a larger nuclear charge.
- B a larger nucleus.
- C more occupied electron shells.
- D a smaller first ionization energy.

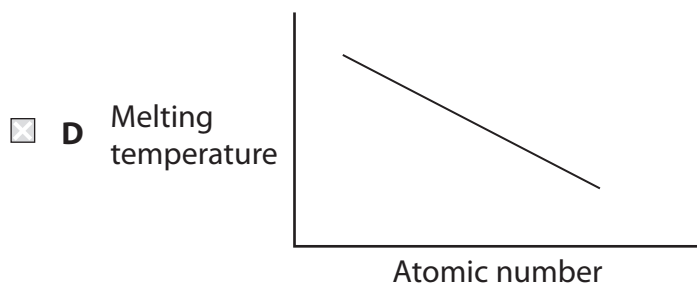
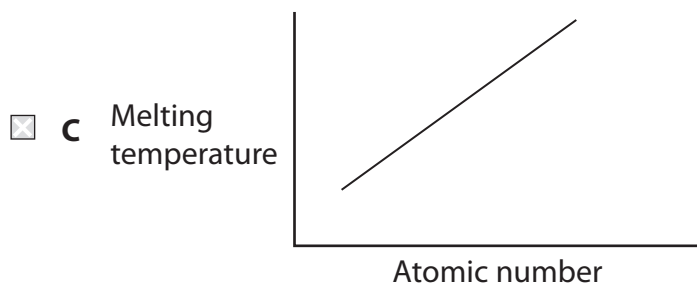
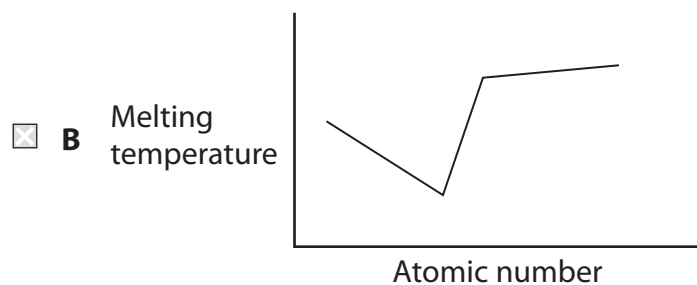
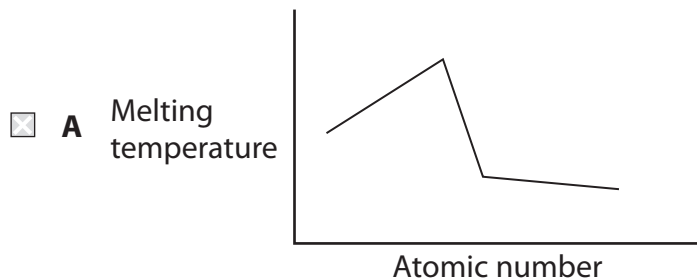
(Total for Question 4 = 1 mark)

5 Which of the following results in the most polarizing cation?

	Cation radius	Cation charge
<input type="checkbox"/> A	small	small
<input type="checkbox"/> B	small	large
<input type="checkbox"/> C	large	small
<input type="checkbox"/> D	large	large

(Total for Question 5 = 1 mark)

6 Which of the following graphs, not drawn to scale, best represents the trend in the melting temperatures of the elements across Period 3, from sodium to argon?



(Total for Question 6 = 1 mark)

7 Which one of the following ions has the smallest radius?

- A F^-
- B Mg^{2+}
- C Na^+
- D O^{2-}

(Total for Question 7 = 1 mark)

8 In which of the following pairs does the second element have a **lower** 1st ionization energy than the first element?

	First element	Second element
<input type="checkbox"/> A	Si	C
<input type="checkbox"/> B	Na	Mg
<input type="checkbox"/> C	Be	B
<input type="checkbox"/> D	Ar	Ne

(Total for Question 8 = 1 mark)

9 Element X is in Group 3 and element Y is in Group 6 of the Periodic Table.

Which of the following is the most likely formula of the compound formed when X and Y react together?

- A X_2Y_3
- B X_3Y_2
- C X_2Y
- D XY_2

(Total for Question 9 = 1 mark)

10 Four sequences of ionization energies of elements, in kJ mol^{-1} , are shown below.

A 590 1145 4912 6474 8144

B 520 496 419 403 376

C 1000 1251 1521 419 590

D 631 658 650 653 717

(a) The sequence giving the first ionization energies of elements going down a Group in the Periodic Table is

(1)

A

B

C

D

(b) The sequence showing the first five ionization energies of calcium is

(1)

A

B

C

D

(c) The sequence showing the first ionization energy of successive elements, in which atomic number increases by one each time, starting with an element in Group 6 is

(1)

A

B

C

D

(Total for Question 10 = 3 marks)

11 Which of the following ions has the **smallest** ionic radius?

A Ca^{2+}

B K^+

C S^{2-}

D Cl^-

(Total for Question 11 = 1 mark)

12 This is a question about ionisation energies.

(a) Define **in words** the term ‘first ionisation energy’.

(3)

.....

.....

.....

.....

.....

.....

.....

(b) Write the equation for the **second** ionisation energy of lithium.

(1)

(c) Why is it not possible to determine the **third** ionisation energy for helium?

(1)

.....

.....

*f) Explain why the first ionisation energy of sulfur is less than that of phosphorus.

(2)

.....

.....

.....

.....

.....

.....

.....

.....

.....

.....

*g) The first ionisation energy for sodium is $+496 \text{ kJ mol}^{-1}$ and for magnesium is $+738 \text{ kJ mol}^{-1}$. Hence suggest a value for the first ionisation energy of aluminium and justify your choice.

(3)

Ionisation Energy Value:

Justification

.....

.....

.....

.....

.....

.....

.....

.....

.....

.....

(Total for Question 12 = 17 marks)

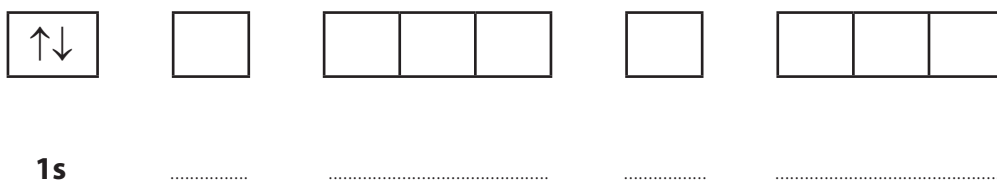
13 The first ionization energies for the elements in Period 3 of the Periodic Table are

Element	Na	Mg	Al	Si	P	S	Cl	Ar
First ionization energy / kJ mol ⁻¹	496	738	578	789	1012	1000	1251	1521

(a) (i) Complete the electronic configuration of phosphorus, using the electrons-in-boxes notation.

Write the symbols for the sub-shells on the dotted lines.

(2)



*(ii) The first ionization energies generally increase from left to right across the period.

Explain why the first ionization energy of sulfur is **lower** than that of phosphorus.

(2)

.....

.....

.....

.....

.....

.....

.....

(iii) Write an equation, with state symbols, to show the **third** ionization energy of phosphorus.

(2)

* (b) (i) Explain why the first ionization energy of nitrogen is greater than the first ionization energy of phosphorus.

(3)

.....

.....

.....

.....

.....

.....

.....

.....

.....

(ii) Draw a dot and cross diagram to show the bonding in a molecule of nitrogen.
Show **outer** electrons only.

(2)

(c) Solid white phosphorus exists as P_4 molecules.

Calculate the number of molecules in 24.8 g of white phosphorus.

[The Avogadro constant, $L = 6.02 \times 10^{23} \text{ mol}^{-1}$]

(2)

(c) *(i) Explain why the first ionization energy of aluminium ($Z = 13$) is less than that of magnesium ($Z = 12$).

(2)

.....

.....

.....

.....

*(ii) Explain why the first ionization energy of sulfur ($Z = 16$) is less than that of phosphorus ($Z = 15$).

(2)

.....

.....

.....

.....

(d) The table below, which is incomplete, refers to the elements sodium to sulfur.

Element	Na	Mg	Al	Si	P	S
Melting temperature	low	high				
Structure		giant				
Electrical conductivity		high		X		

(i) Complete the **melting temperature** row by using only the words 'high' or 'low'.

(2)

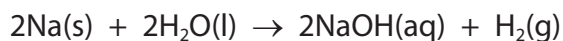
(ii) Complete the **structure** row by using only the words 'giant' or 'molecular'.

(2)

(iii) Complete the **electrical conductivity** row by using only the words 'high' or 'low'.

(1)

- (e) In an experiment, 2.76 g of sodium completely reacted with water to form 500 cm³ of aqueous sodium hydroxide.



- (i) Calculate the number of moles of sodium that reacted. (1)

- (ii) Calculate the maximum volume, in dm³, of hydrogen that can be formed at room temperature and pressure.

[1 mol of any gas occupies 24 dm³ at room temperature and pressure.] (2)

- (iii) Calculate the concentration, in mol dm⁻³, of the sodium hydroxide solution, NaOH(aq), formed in the experiment. (2)

(Total for Question 14 = 19 marks)