

Please check the examination details below before entering your candidate information

Candidate surname

Other names

**Pearson Edexcel
Level 3 GCE**

Centre Number

--	--	--	--	--

Candidate Number

--	--	--	--	--

Time 2 hours

Paper
reference

9EC0/03

Economics A

Advanced

PAPER 3: Microeconomics and Macroeconomics

You do not need any other materials.

Total Marks

Instructions

- Use **black** ink or ball-point pen.
- **Fill in the boxes** at the top of this page with your name, centre number and candidate number.
- There are two sections in this question paper.
- In Section A, answer **all** questions 1(a) to 1(c) and **one** question from 1(d) or 1(e).
- In Section B, answer **all** questions 2(a) to 2(c) and **one** question from 2(d) or 2(e).
- Answer the questions in the spaces provided
– *there may be more space than you need.*

Information

- The total mark for this paper is 100.
- The marks for **each** question are shown in brackets
– *use this as a guide as to how much time to spend on each question.*
- Calculators may be used.

Advice

- Read each question carefully before you start to answer it.
- Check your answers if you have time at the end.
- Good luck with your examination.

Turn over ►

P65667A

©2021 Pearson Education Ltd.

1/1/1/1/e2/



Pearson

SECTION A

Read extracts A and B before answering Question 1.

Answer ALL Questions 1(a) to 1(c), and EITHER Question 1(d) OR 1(e).

Write your answers in the spaces provided.

You are advised to spend 1 hour on this section.

Question 1

Hand car wash (HCW) firms in the UK

Extract A

What is the true human cost of your £5 hand car wash (HCW)?

The UK's hand car washes (HCWs) are extremely price competitive, but they have also been linked to modern slavery. Are they ever fair for workers?

There is little agreement about how many HCWs there are in the UK. Estimates range from 10 000 to 20 000. This lack of accurate information about the industry makes government regulation very difficult. Automated car washes, with their fierce rotating bristles, used to be the first option for drivers in a hurry. Now there is more choice. While the economy slows and incomes fail to keep up with inflation, demand for HCWs has grown. Many people see paying £5 for a car washed by someone else, rather than cleaning it at home, as a small expense which yields a high utility. But what is the true cost of a £5 car wash – and what should we be paying?

The growth of HCWs is partly the result of changes in the structure of industry in the UK. Many petrol stations have closed as drivers fill up at supermarkets. Garages and their forecourts have closed as cars become more reliable and locked into service agreements. The available sites for HCWs have therefore increased significantly and rents have fallen.

HCW entrepreneurs have identified available land and have benefitted from changes in the labour market, partly as a result of EU migration. UK drivers are now able to obtain cheap and effective hand car washing. For many migrants, car washes are a first job. "They accept car washing for a short period while they improve their language skills and move into other industries," says Ian Clark, a professor of work and employment at Nottingham Business School. "But there are also car-wash workers without networks who are in a dead end, working there for long periods."

Many drivers are only interested in getting the cheapest wash. If the price is very low, it probably means that workers are receiving less than the minimum wage and working in poor conditions. Crude calculations illustrate the problem. A £5 HCW employing five workers for 10 hours a day would need to wash 79 cars a day to just cover the wage costs. This assumes the workers are paid the minimum wage. This is one car every seven and a half minutes. Even if the profit can be higher on valet services, the price of which can be as little as £12 for a full inside-and-out clean, it's hard to see how a car wash price as low as £5 pays a living wage. This ignores all other costs which HCWs incur such as business rates and rent.

Evidence from car-wash workers is limited but Clark and others have been able to build a picture of some of the tougher conditions on drenched forecourts. "Like nail bars and small garment manufacturers, car washes are what we call 'hard-to-reach places,'" Clark

DO NOT WRITE IN THIS AREA

DO NOT WRITE IN THIS AREA

DO NOT WRITE IN THIS AREA



DO NOT WRITE IN THIS AREA

DO NOT WRITE IN THIS AREA

DO NOT WRITE IN THIS AREA

explains. As part of the research, Clark and his team spoke to workers from 45 HCWs in the Midlands. 35

Clark and his team met and observed workers who lacked waterproof boots or trousers, or hi-vis jackets and gloves. "They're spraying around hydrochloric acid solution for alloy wheels, breathing in the vapour and fumes," Clark says. Some workers were paid a little over half the minimum wage. 40

(Source adapted from: <https://www.theguardian.com/world/2018/jul/16/true-human-cost-5-pound-hand-car-wash-modern-slavery>)



Extract B

Government intervention in the HCW industry

There are three main areas of government intervention that might impact on labour intensive firms such as HCWs:

First, there is the planning issue which focuses on the impact on the environment, for example, the disposal and recycling of waste water and chemicals. There could be planning regulations to prevent the use of tarmac rather than concrete on forecourts. Tarmac allows waste water and chemicals to seep into the sub soil. It could also be a requirement to have a sludge trap to stop the waste entering waterways. 5

Second, there is the health and safety issue for workers. Prolonged exposure to chemicals and lack of protective clothing puts the health of workers at risk. Performance targets could involve minimum levels of protective clothing and rest breaks for the workers. 10

Third, there is the issue of tax. The informal nature of the business type makes tax evasion easier.

Not all UK HCWs violate regulations. There are legitimate, regulated HCW firms as well as examples of good practice by independent outlets. One national supermarket, Tesco, has banned all independent hand car washes from its car parks. It is now in a partnership agreement with national car wash operator Waves. It uses a WashMark certificate of quality and compliance which was introduced by the industry to improve working conditions. Other major supermarkets are considering similar changes. One adviser believes £9 is a reasonable minimum price for a basic wash. Some pressure groups have developed a mobile phone app where evidence of unreasonable conditions can be reported by drivers. 15 20

Involving drivers in the issue, and making them demand fairer car washes, creates an incentive for good businesses to improve practices and come forward to get a WashMark certificate. 25

(Source adapted from: <https://www.parliament.uk/documents/commons-committees/environmental-audit/Hand-Car-Wash-evidence.pdf> research into HCWs by Professor Ian Clark, Nottingham Business School May 2018)



- 1 (a) Using the information provided, explain the market structure that best describes the hand car wash (HCW) industry in the UK. (5)
- (b) Examine **two** reasons why the demand for HCWs increases during a period when consumer 'incomes fail to keep up with inflation' (Extract A line 8). (8)
- (c) Discuss the likely effects of changes in the level of migration on firms such as HCWs in the UK. Use a labour market diagram and the information provided to support your answer. (12)

EITHER

- (d) Evaluate the microeconomic and macroeconomic factors which determine the number of firms in an industry. Refer to HCWs or another industry of your choice. (25)

OR

- (e) Evaluate the microeconomic and macroeconomic effects of increased government intervention in an industry. Refer to HCWs or another industry of your choice. (25)



(a) Using the information provided, explain the market structure that best describes the hand car wash (HCW) industry in the UK.

(5)

Area with horizontal dotted lines for writing the answer.

DO NOT WRITE IN THIS AREA

DO NOT WRITE IN THIS AREA

DO NOT WRITE IN THIS AREA



(b) Examine **two** reasons why the demand for HCWs increases during a period when consumer 'incomes fail to keep up with inflation' (Extract A line 8).

(8)

DO NOT WRITE IN THIS AREA

DO NOT WRITE IN THIS AREA

DO NOT WRITE IN THIS AREA

Area with horizontal dotted lines for writing.



DO NOT WRITE IN THIS AREA

DO NOT WRITE IN THIS AREA

DO NOT WRITE IN THIS AREA

Handwriting practice area with 20 horizontal dotted lines.



(c) Discuss the likely effects of changes in the level of migration on firms such as HCWs in the UK. Use a labour market diagram and the information provided to support your answer.

(12)

DO NOT WRITE IN THIS AREA

DO NOT WRITE IN THIS AREA

DO NOT WRITE IN THIS AREA

Area with horizontal dotted lines for writing the answer.



DO NOT WRITE IN THIS AREA

DO NOT WRITE IN THIS AREA

DO NOT WRITE IN THIS AREA

Handwriting practice area with 20 horizontal dotted lines.



DO NOT WRITE IN THIS AREA

DO NOT WRITE IN THIS AREA

DO NOT WRITE IN THIS AREA

Blank writing area with horizontal dotted lines.



DO NOT WRITE IN THIS AREA

DO NOT WRITE IN THIS AREA

DO NOT WRITE IN THIS AREA

Handwriting practice area with 20 horizontal dotted lines.



DO NOT WRITE IN THIS AREA

DO NOT WRITE IN THIS AREA

DO NOT WRITE IN THIS AREA

Handwriting practice area with 20 horizontal dotted lines.



DO NOT WRITE IN THIS AREA

DO NOT WRITE IN THIS AREA

DO NOT WRITE IN THIS AREA

Blank writing area with horizontal dotted lines.



DO NOT WRITE IN THIS AREA

DO NOT WRITE IN THIS AREA

DO NOT WRITE IN THIS AREA

Blank writing area with horizontal dotted lines.



DO NOT WRITE IN THIS AREA

DO NOT WRITE IN THIS AREA

DO NOT WRITE IN THIS AREA

(Total for Question 1 = 50 marks)

TOTAL FOR SECTION A = 50 MARKS



P 6 5 6 6 7 A 0 1 7 3 6

SECTION B

Read Figures 1 to 4 and extracts C and D before answering Question 2.

Answer ALL Questions 2(a) to 2(c), and EITHER Question 2(d) OR 2(e).

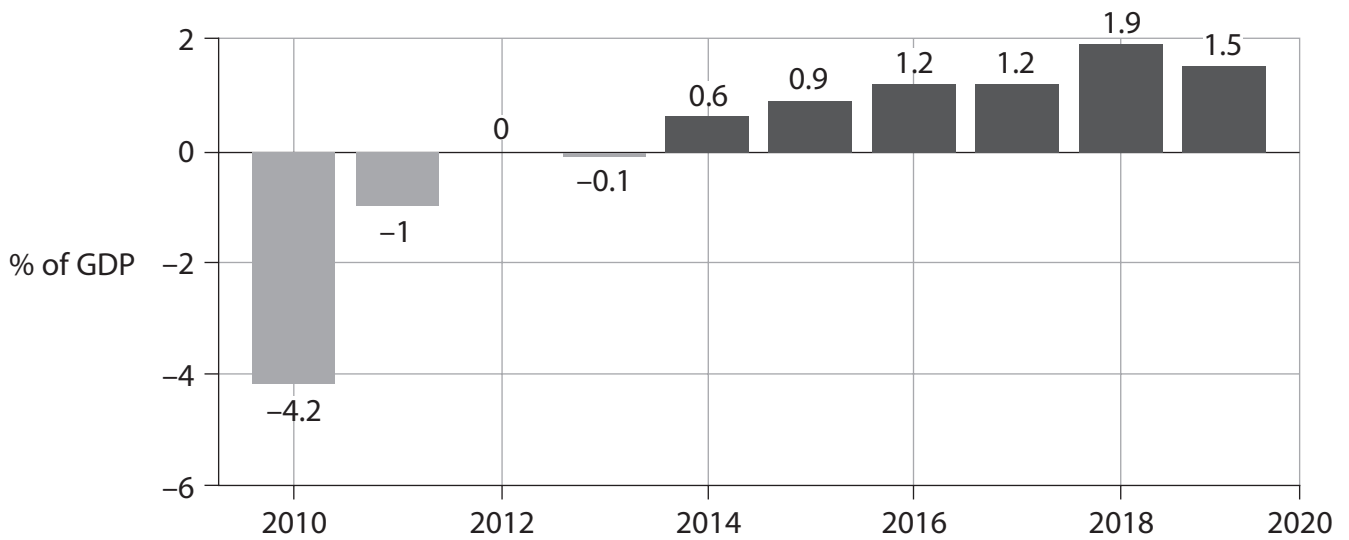
Write your answers in the spaces provided.

You are advised to spend 1 hour on this section.

Question 2

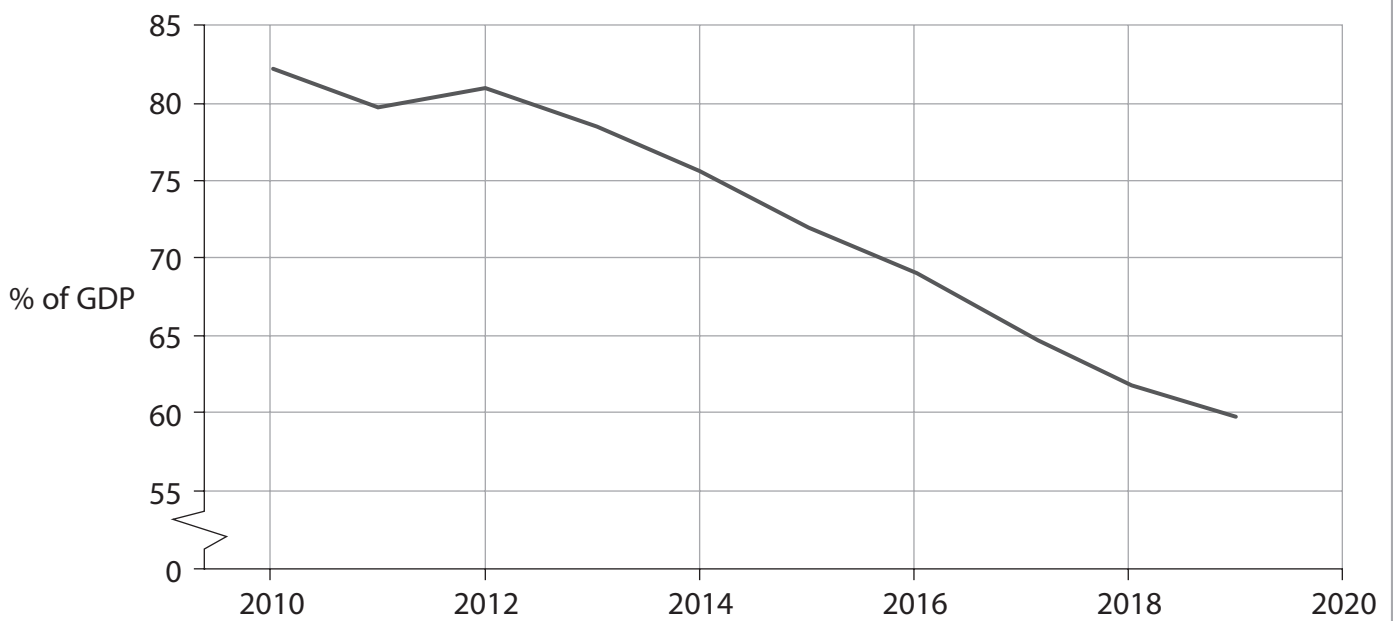
The German economy

Figure 1: German government budget balance, percentage of GDP, 2010 to 2019



(Source adapted from: The Economist Nov 14th 2019)

Figure 2: German national debt, percentage of GDP, 2010 to 2019



(Source adapted from: The Economist Nov 14th 2019)

DO NOT WRITE IN THIS AREA

DO NOT WRITE IN THIS AREA

DO NOT WRITE IN THIS AREA

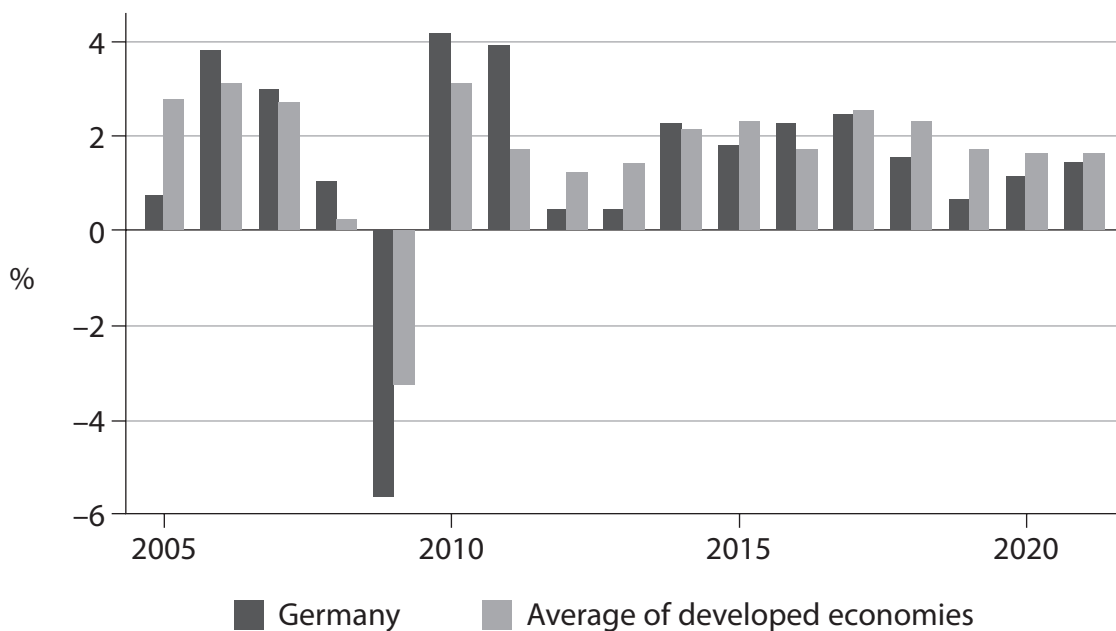


DO NOT WRITE IN THIS AREA

DO NOT WRITE IN THIS AREA

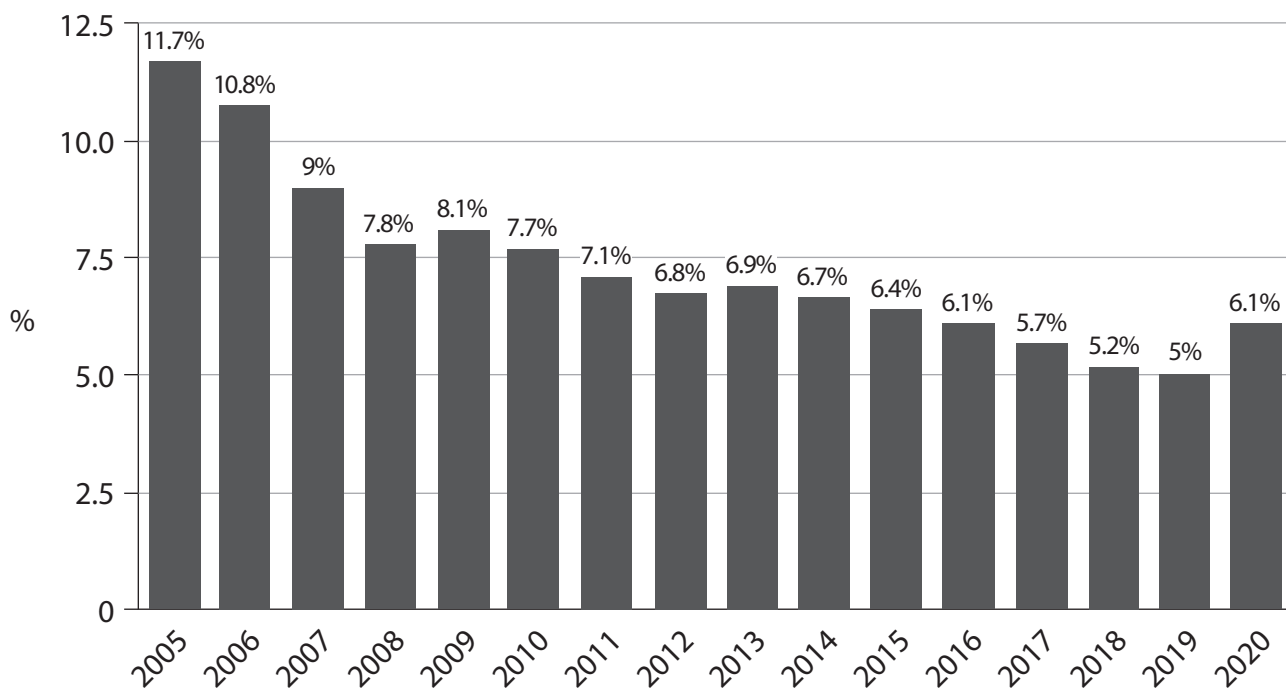
DO NOT WRITE IN THIS AREA

Figure 3: Annual percentage change in real GDP, Germany and average of developed economies, 2005 to 2021 (forecasted data for 2020 and 2021)



(Source adapted from: IMF and German Federal Statistical Office)

Figure 4: Unemployment rate in Germany, percentage of labour force, 2005 to 2020 (2020 figure is forecasted)



(Source adapted from: bundesagentur für arbeit.de and <https://www.ft.com/content/5486b247-c73e-4887-a2b2-528b23e301a6>)



Extract C

Why Germany keeps to budget rules despite a slowdown in growth

Germany's economic boom is over, as it has entered recession. During the last ten years of economic growth well over 4 million jobs were created.

The fear of recession has revived a debate in Germany: should the government spend more to stimulate growth? It is written into the German constitution that the fiscal deficit cannot be greater than 0.35% of GDP, once the effects of the economic cycle have been removed. Germany's budget has been in surplus since 2014 and the government is always reluctant to increase spending which would create a deficit. In 2018, aided by booming employment and low interest costs on existing debt, the budget ran to a surplus 1.9% of GDP.

5

10

Germany's main trading partners have long been angered by German fiscal policy. The French President criticised Germany's budget and current account surpluses that "always occur at the expense of others".

Large parts of Germany's infrastructure need significant investment. As the economy has slowed, a decision to run a balanced-budget policy has become harder to defend. In wealthy regions of Germany, crumbling schools have been closed for fear of collapse, and information and mobile technology on a wide scale needs to be modernised. The World Economic Forum reported that accessibility of fibre optic broadband also "remains the privilege of the few". However, private sector firms, such as major motor manufacturers, are still willing to invest in new technology and the profitability of some of these firms, in the long run, benefits as a result.

15

20

The state development bank puts Germany's investment shortfall at €138 billion (£120 billion). Arguments for a much more expansionary fiscal policy have failed to influence government policy. Big government programmes, such as a recent package to reduce Germany's carbon emissions, are only implemented when they satisfy fiscal rules.

25

(Source adapted from: The Economist Nov 14th 2019
and <https://www.ft.com/content/3cec4908-d164-11e9-8367-807ebd53ab77> 7th September 2019
and <https://www.ft.com/content/198f072e-4e42-11ea-95a0-43d18ec715f5> and
<https://www.ft.com/content/d89d9404-c586-11e9-a8e9-296ca66511c9> and
<https://www.ft.com/content/8f87c03c-93dc-11e8-b67b-b8205561c3fe>)



DO NOT WRITE IN THIS AREA

DO NOT WRITE IN THIS AREA

DO NOT WRITE IN THIS AREA

Extract D

Germany drops to number 7 in the Global Competitiveness Index

Despite being the largest economy in the European Union, Germany's competitiveness is declining, according to the World Economic Forum (WEF). Germany dropped four places in the WEF's Global Competitiveness Index, coming in as the seventh-most competitive economy. Out of the 103 indicators used in the report, Germany received lower scores in 53 areas in 2019.

5

(Source: <https://www.dw.com/en/germany-falls-in-global-competitiveness-ranking/a-50745071> 8 October 2019)



P 6 5 6 6 7 A 0 2 1 3 6

- 2 (a) Explain **one** reason why a country such as Germany wants to avoid an increase in the national debt relative to GDP (Figure 2). (5)
- (b) Examine **two** likely effects of the forecast change in the rate of unemployment between 2019 to 2020, on firms in Germany. Refer to Figure 4 in your answer. (8)
- (c) Discuss the likely impact of investment in new technology on the profitability of firms in Germany, as described in Extract C line 20. Use a cost and revenue diagram to support your answer. (12)

EITHER

- (d) Evaluate the microeconomic and macroeconomic factors which are likely to determine the rate of economic growth in Germany relative to other developed economies. (25)

OR

- (e) Evaluate the microeconomic and macroeconomic impacts of 'a much more expansionary fiscal policy' (Extract C line 23) on the German economy. (25)



(a) Explain **one** reason why a country such as Germany wants to avoid an increase in the national debt relative to GDP (Figure 2).

(5)

DO NOT WRITE IN THIS AREA

DO NOT WRITE IN THIS AREA

DO NOT WRITE IN THIS AREA

Area with horizontal dotted lines for writing.



P 6 5 6 6 7 A 0 2 3 3 6

(b) Examine **two** likely effects of the forecast change in the rate of unemployment between 2019 to 2020, on firms in Germany. Refer to Figure 4 in your answer.

(8)

Area with horizontal dotted lines for writing the answer.

DO NOT WRITE IN THIS AREA

DO NOT WRITE IN THIS AREA

DO NOT WRITE IN THIS AREA



DO NOT WRITE IN THIS AREA

DO NOT WRITE IN THIS AREA

DO NOT WRITE IN THIS AREA

Handwriting practice area with 25 horizontal dotted lines.



DO NOT WRITE IN THIS AREA

DO NOT WRITE IN THIS AREA

DO NOT WRITE IN THIS AREA

Handwriting practice area with 20 horizontal dotted lines.



DO NOT WRITE IN THIS AREA

DO NOT WRITE IN THIS AREA

DO NOT WRITE IN THIS AREA

Handwriting practice area with 20 horizontal dotted lines.



DO NOT WRITE IN THIS AREA

DO NOT WRITE IN THIS AREA

DO NOT WRITE IN THIS AREA

Handwriting practice area with 20 horizontal dotted lines.



DO NOT WRITE IN THIS AREA

DO NOT WRITE IN THIS AREA

DO NOT WRITE IN THIS AREA

Handwriting practice area with 25 horizontal dotted lines.



DO NOT WRITE IN THIS AREA

DO NOT WRITE IN THIS AREA

DO NOT WRITE IN THIS AREA

Handwriting practice area with 20 horizontal dotted lines.



DO NOT WRITE IN THIS AREA

DO NOT WRITE IN THIS AREA

DO NOT WRITE IN THIS AREA

Handwriting practice area with 25 horizontal dotted lines.



DO NOT WRITE IN THIS AREA

DO NOT WRITE IN THIS AREA

DO NOT WRITE IN THIS AREA

(Total for Question 2 = 50 marks)

TOTAL FOR SECTION B = 50 MARKS
TOTAL FOR PAPER = 100 MARKS



DO NOT WRITE IN THIS AREA

DO NOT WRITE IN THIS AREA

DO NOT WRITE IN THIS AREA

BLANK PAGE



DO NOT WRITE IN THIS AREA

DO NOT WRITE IN THIS AREA

DO NOT WRITE IN THIS AREA

BLANK PAGE

