

Physical Quantities & Units

Question paper 1

Level	International A Level
Subject	Physics
Exam Board	CIE
Topic	Physical Quantities & Units
Sub Topic	
Paper Type	Theory
Booklet	Question paper 1

Time Allowed: 90 minutes

Score: /75

Percentage: /100

A*	A	B	C	D	E	U
>85%	'77.5%	70%	62.5%	57.5%	45%	<45%

1 (a) Use the definition of power to show that the SI base units of power are $\text{kg m}^2 \text{s}^{-3}$.

[2]

(b) Use an expression for electrical power to determine the SI base units of potential difference.

units[2]

2 (a) Use the definition of work done to show that the SI base units of energy are $\text{kg m}^2\text{s}^{-2}$.

[2]

(b) Define potential difference.

.....

..... [1]

(c) Determine the SI base units of resistance. Show your working.

units [3]

- 3 (a) The distance between the Sun and the Earth is 1.5×10^{11} m. State this distance in Gm.

distance = Gm [1]

- (b) The distance from the centre of the Earth to a satellite above the equator is 42.3Mm. The radius of the Earth is 6380 km.
A microwave signal is sent from a point on the Earth directly below the satellite.

Calculate the time taken for the microwave signal to travel to the satellite and back.

time = s [2]

- (c) The speed v of a sound wave through a gas of density ρ and pressure P is given by

$$v = \sqrt{\frac{CP}{\rho}}$$

where C is a constant.

Show that C has no unit.

[3]

- (d) Underline all the scalar quantities in the list below.

acceleration energy momentum power weight

[1]

- (e) A boat travels across a river in which the water is moving at a speed of 1.8 m s^{-1} . The velocity vectors for the boat and the river water are shown to scale in Fig. 1.1.

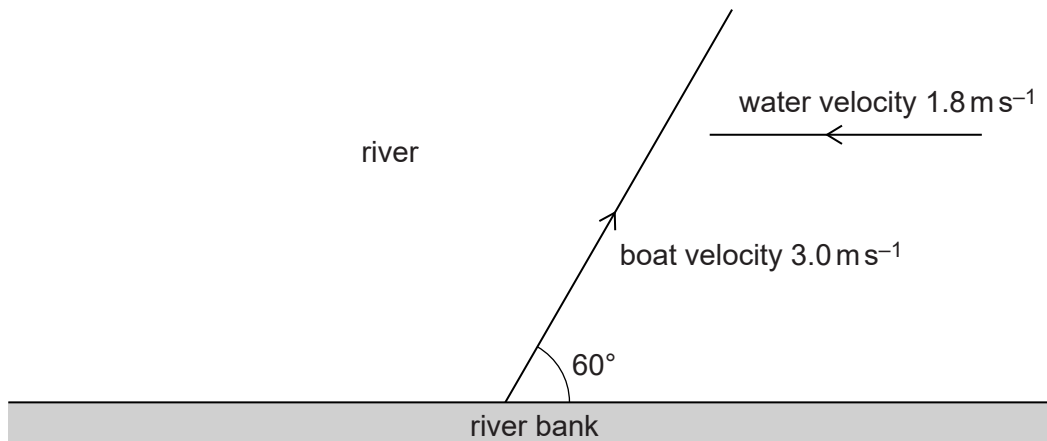


Fig. 1.1 (shown to scale)

In still water the speed of the boat is 3.0 m s^{-1} . The boat is directed at an angle of 60° to the river bank.

- (i) On Fig. 1.1, draw a vector triangle or a scale diagram to show the resultant velocity of the boat. [2]
- (ii) Determine the magnitude of the resultant velocity of the boat.

resultant velocity = m s^{-1} [2]

4 (a) Mass, length and time are SI base quantities.

State two other base quantities.

1.

2.

[2]

(b) A mass m is placed on the end of a spring that is hanging vertically, as shown in Fig. 1.1.

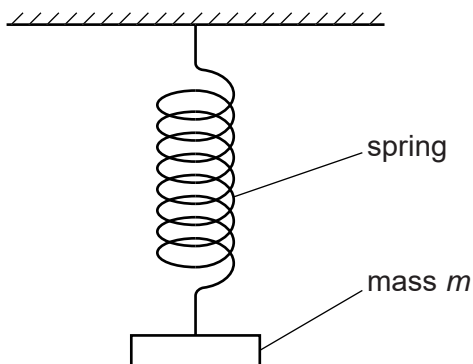


Fig. 1.1

The mass is made to oscillate vertically. The time period of the oscillations of the mass is T .

The period T is given by

$$T = C \sqrt{\frac{m}{k}}$$

where C is a constant and k is the spring constant.

Show that C has no units.

[3]

5 (a) The kilogram, metre and second are SI base units.

State two other base units.

1.

2.

[2]

(b) Determine the SI base units of

(i) stress,

SI base units[2]

(ii) the Young modulus.

SI base units[1]

6 (a) Force is a vector quantity. State three other vector quantities.

1.
2.
3.

[2]

(b) Three coplanar forces X , Y and Z act on an object, as shown in Fig. 3.1.

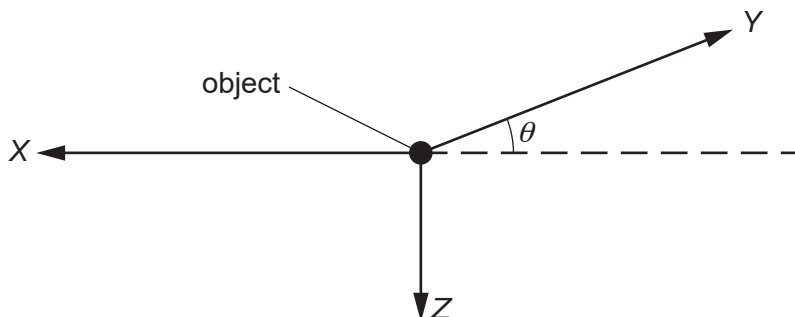


Fig. 3.1

The force Z is vertical and X is horizontal. The force Y is at an angle θ to the horizontal. The force Z is kept constant at 70 N.

In an experiment, the magnitude of force X is varied. The magnitude and direction of force Y are adjusted so that the object remains in equilibrium.

Fig. 3.2 shows the variation of the magnitude of force Y with the magnitude of force X .

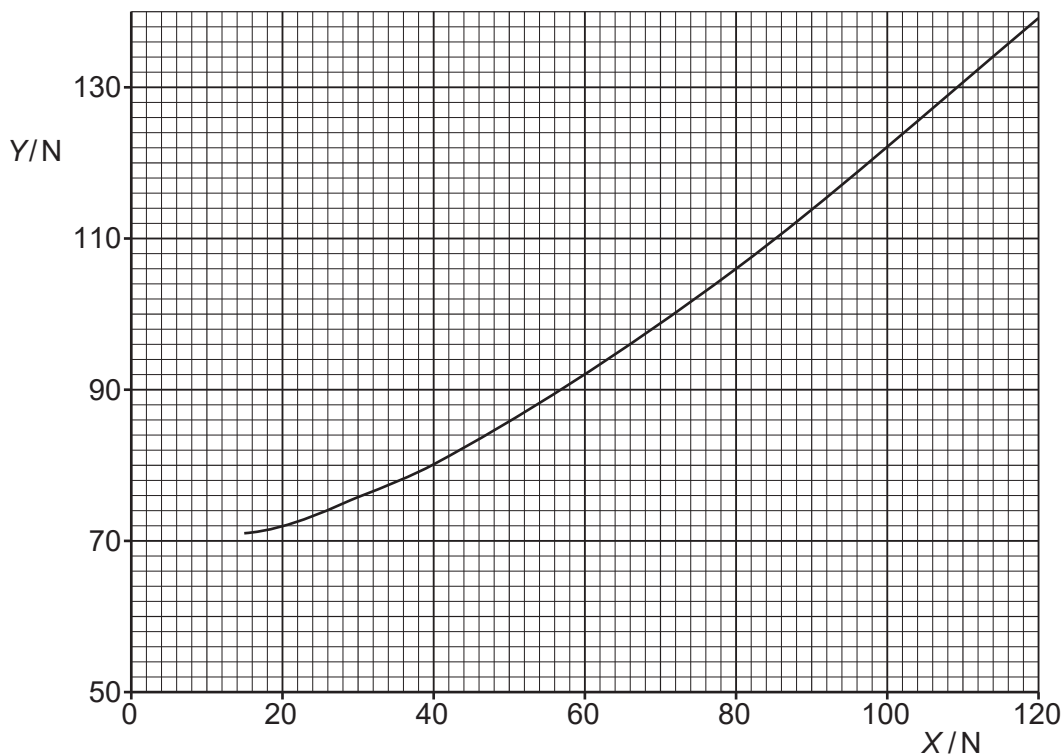


Fig. 3.2

(i) Use Fig. 3.2 to estimate the magnitude of Y for $X = 0$.

$Y = \dots\dots\dots$ N [1]

(ii) State and explain the value of θ for $X = 0$.

.....
.....
.....[2]

(iii) The magnitude of X is increased to 160 N. Use resolution of forces to calculate the value of

1. angle θ ,

$\theta = \dots\dots\dots^\circ$ [2]

2. the magnitude of force Y .

$Y = \dots\dots\dots$ N [2]

(c) The angle θ decreases as X increases. Explain why the object cannot be in equilibrium for $\theta = 0$.

.....
.....
.....[1]

7 (a) Show that the SI base units of power are $\text{kg m}^2\text{s}^{-3}$.

[3]

(b) The rate of flow of thermal energy $\frac{Q}{t}$ in a material is given by

$$\frac{Q}{t} = \frac{CAT}{x}$$

where A is the cross-sectional area of the material,
 T is the temperature difference across the thickness of the material,
 x is the thickness of the material,
 C is a constant.

Determine the SI base units of C .

base units [4]

8 (a) Underline **all** the base quantities in the following list.

ampere charge current mass second temperature weight

[2]

(b) The potential energy E_p stored in a stretched wire is given by

$$E_p = \frac{1}{2}C\sigma^2V$$

where C is a constant,
 σ is the strain,
 V is the volume of the wire.

Determine the SI base units of C .

base units[3]

9 (a) State two SI base units other than the kilogram, metre and second.

1.

2.

[2]

(b) A metal wire has original length l_0 . It is then suspended and hangs vertically as shown in Fig. 1.1.

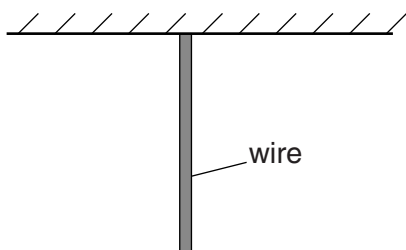


Fig. 1.1

The weight of the wire causes it to stretch. The elastic potential energy stored in the wire is E .

(i) Show that the SI base units of E are $\text{kg m}^2 \text{s}^{-2}$.

[2]

(ii) The elastic potential energy E is given by

$$E = C\rho^2g^2Al_0^3$$

where ρ is the density of the metal,
 g is the acceleration of free fall,
 A is the cross-sectional area of the wire
and C is a constant.

Determine the SI base units of C .

SI base units of C [3]

10 A cylindrical disc is shown in Fig. 1.1.

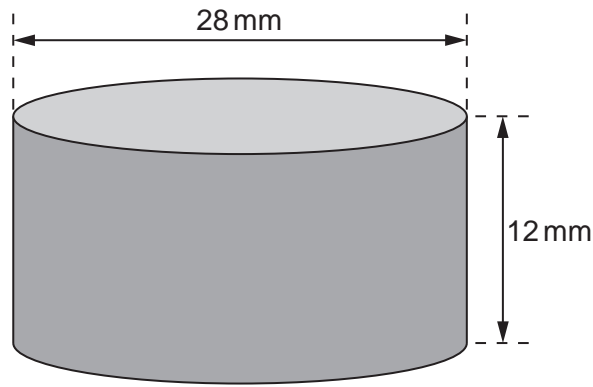


Fig. 1.1

The disc has diameter 28 mm and thickness 12 mm.
The material of the disc has density $6.8 \times 10^3 \text{ kg m}^{-3}$.

Calculate, to two significant figures, the weight of the disc.

weight = N [4]

11 (a) Determine the SI base units of power.

SI base units of power [3]

(b) Fig. 1.1 shows a turbine that is used to generate electrical power from the wind.

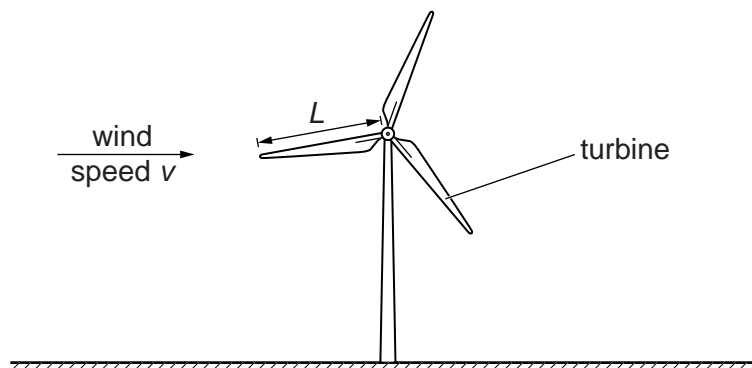


Fig. 1.1

The power P available from the wind is given by

$$P = CL^2\rho v^3$$

where L is the length of each blade of the turbine,
 ρ is the density of air,
 v is the wind speed,
 C is a constant.

(i) Show that C has no units.

- (ii) The length L of each blade of the turbine is 25.0m and the density ρ of air is 1.30 in SI units. The constant C is 0.931.
The efficiency of the turbine is 55% and the electric power output P is 3.50×10^5 W.

Calculate the wind speed.

wind speed = ms^{-1} [3]

- (iii) Suggest two reasons why the electrical power output of the turbine is less than the power available from the wind.

1.

.....

2.

.....

[2]