

Monday 20 June 2016 – Morning

## A2 GCE PHYSICS A

G484/01 The Newtonian World

Candidates answer on the Question Paper.


**OCR supplied materials:**

- Data, Formulae and Relationships Booklet (sent with general stationery)

**Other materials required:**

- Electronic calculator

**Duration:** 1 hour 15 minutes




Candidate forename		Candidate surname	
--------------------	--	-------------------	--

Centre number						Candidate number				
---------------	--	--	--	--	--	------------------	--	--	--	--

### INSTRUCTIONS TO CANDIDATES

- Write your name, centre number and candidate number in the boxes above. Please write clearly and in capital letters.
- Use black ink. HB pencil may be used for graphs and diagrams only.
- Answer **all** the questions.
- Read each question carefully. Make sure you know what you have to do before starting your answer.
- Write your answer to each question in the space provided. If additional space is required, you should use the lined pages at the end of this booklet. The question number(s) must be clearly shown.
- Do **not** write in the bar codes.

### INFORMATION FOR CANDIDATES

- The number of marks is given in brackets [ ] at the end of each question or part question.
- The total number of marks for this paper is **60**.
- You may use an electronic calculator.
- You are advised to show all the steps in any calculations.
-  Where you see this icon you will be awarded marks for the quality of written communication in your answer.  
This means, for example, you should:
  - ensure that text is legible and that spelling, punctuation and grammar are accurate so that meaning is clear;
  - organise information clearly and coherently, using specialist vocabulary when appropriate.
- This document consists of **20** pages. Any blank pages are indicated.

Answer **all** the questions.

- 1 A ball is held above level ground. It is then dropped from rest at time  $t = 0$ . Fig. 1.1 shows the velocity  $v$  against time  $t$  graph for this ball bouncing vertically. Ignore the effect of air resistance.

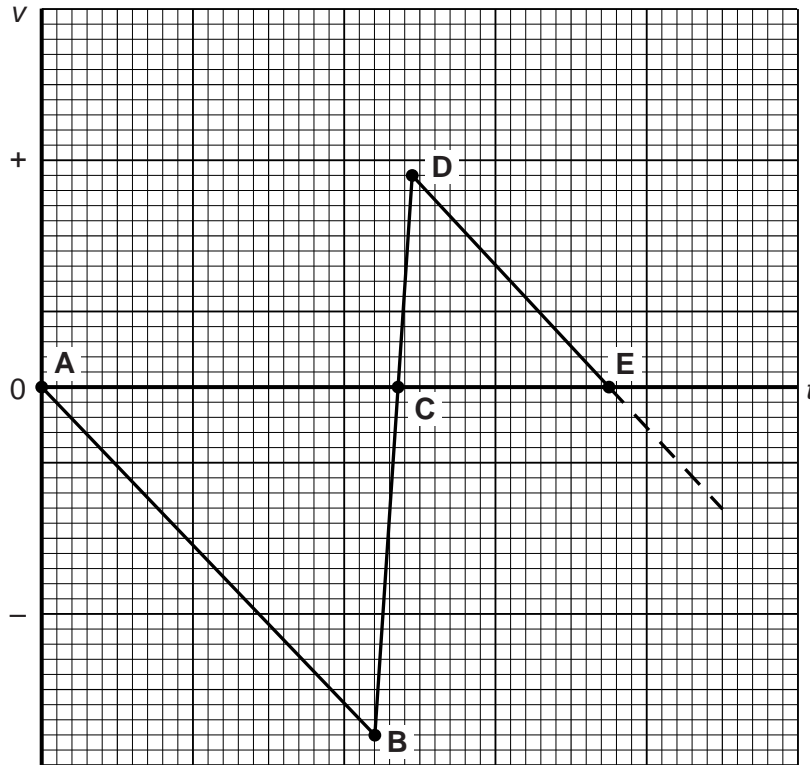


Fig. 1.1

- (a) (i) Explain why the gradient of the line **DE** is the same as the gradient of the line **AB**.



*In your answer, you should use appropriate technical terms spelled correctly.*

.....  
 ..... [1]

- (ii) Explain why the area of triangle **ABC** is not the same as the area of triangle **CDE**.

.....  
 .....  
 .....  
 ..... [2]

**3**

**(b)** The ball, of mass 0.13 kg, was dropped from an initial height of 1.7 m. It remained in contact with the ground for 75 ms while experiencing a mean upward force of 16 N.

Calculate

**(i)** the speed of the ball immediately before impact with the ground

speed = ..... ms<sup>-1</sup> [1]

**(ii)** the speed of the ball immediately at **D**

speed = ..... ms<sup>-1</sup> [2]

**(iii)** the maximum height reached after the first bounce.

height = ..... m [1]

2 (a) State Newton's first law of motion.

.....  
.....  
..... [1]

(b) Newton's third law suggests that forces always occur in pairs when two objects interact.

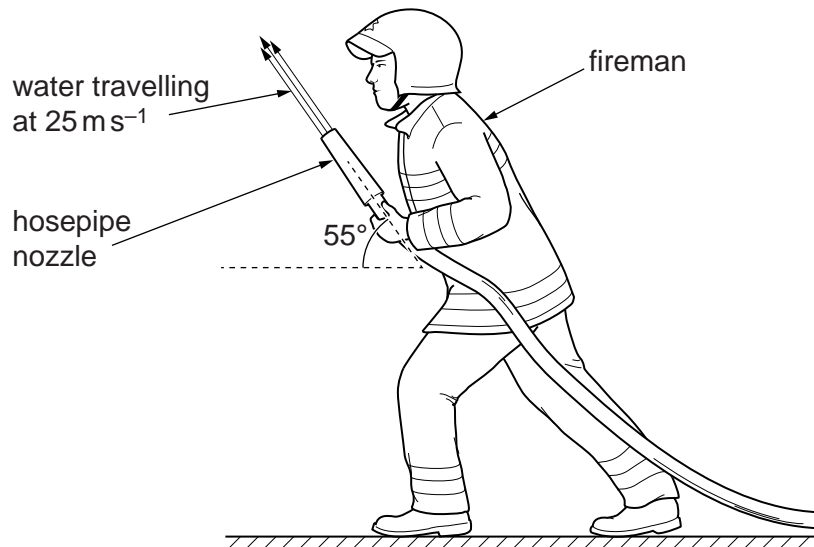
(i) State **two** ways in which the forces in such a pair are identical.

.....  
.....  
..... [2]

(ii) State **two** ways in which these forces are different.

.....  
.....  
..... [2]

- (c) Fig. 2.1 shows a fireman using a hosepipe held at  $55^\circ$  to the horizontal. The cross-sectional area of the hosepipe nozzle is  $3.3 \times 10^{-4} \text{ m}^2$ . Water is ejected from the nozzle at  $25 \text{ m s}^{-1}$ .



**Fig. 2.1**

- (i) Show that the rate at which water is ejected from the nozzle is about  $8.3 \text{ kg s}^{-1}$ .

density of water =  $1.0 \times 10^3 \text{ kg m}^{-3}$

[1]

- (ii) The mass of the fireman is  $92 \text{ kg}$ . Determine the vertical component of the force exerted by the ground on the fireman's feet.

force = ..... N [3]

- 3 (a) Fig. 3.1 shows a displacement against time graph of an object undergoing simple harmonic motion. Seven points, **A** to **G**, have been labelled on the graph.

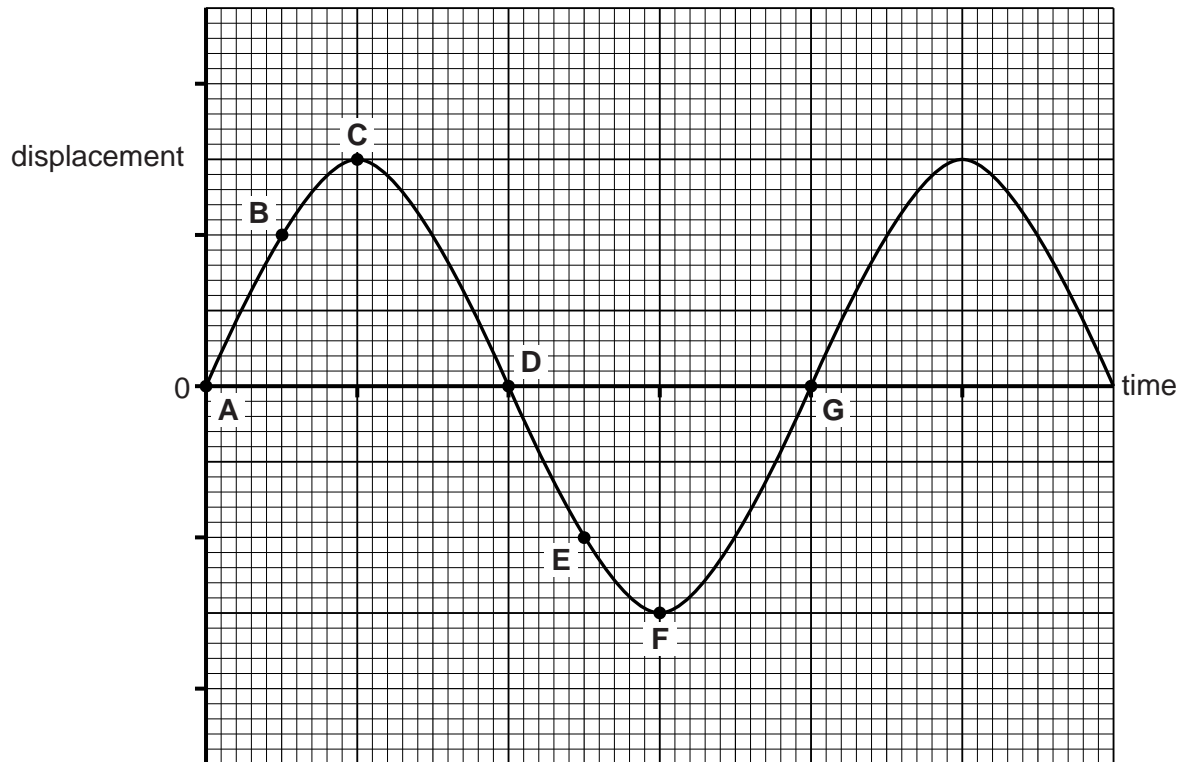
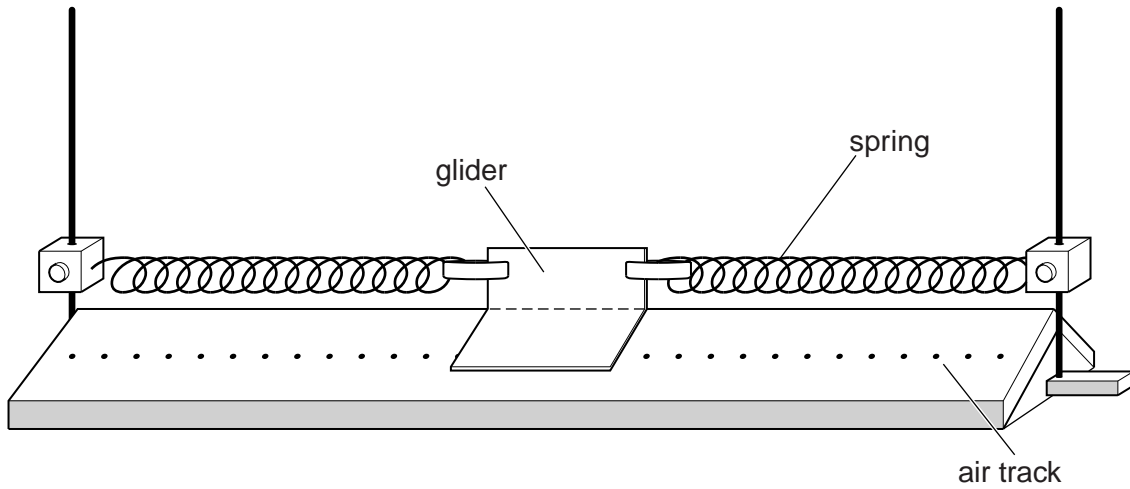


Fig. 3.1

- (i) Write down two points that indicate when the object is at its amplitude position.  
 ..... [1]
- (ii) Write down a point which lags behind **D** by half a period.  
 ..... [1]
- (iii) Determine the phase difference, in radians, between points **B** and **F**.

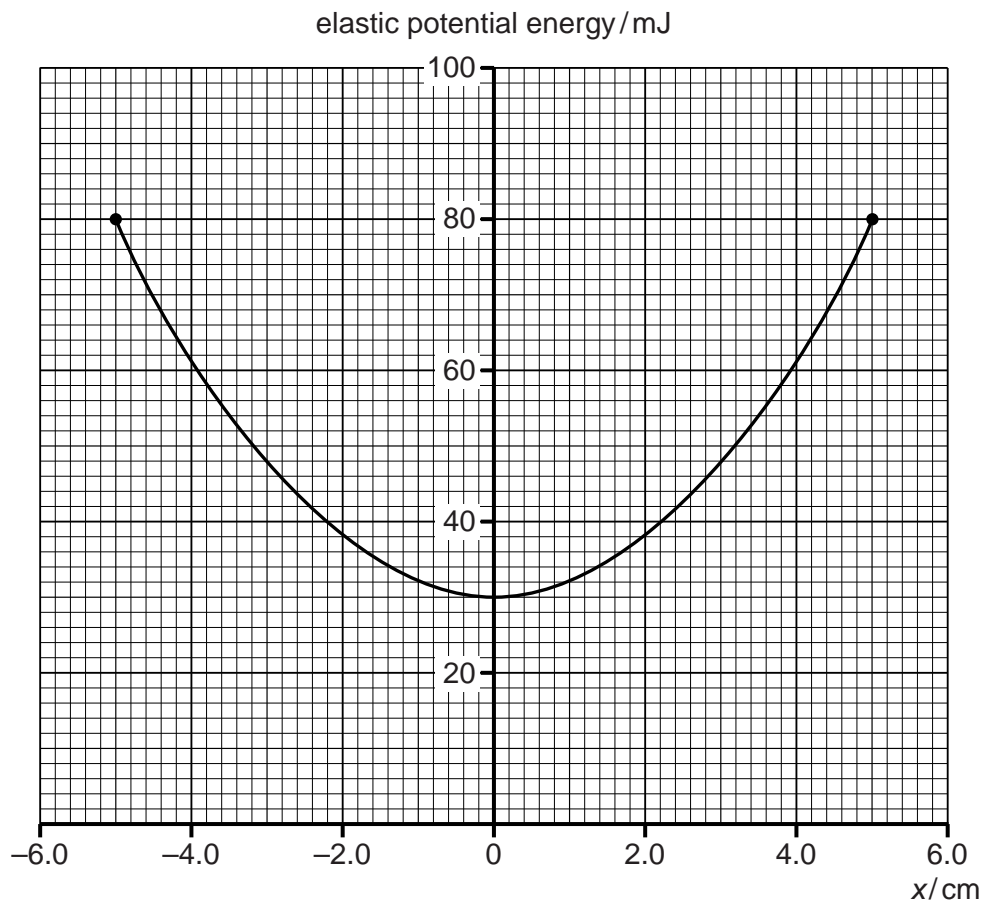
phase difference = ..... rad [1]

- (b) Fig. 3.2 shows an airtrack glider of mass 0.45 kg held in equilibrium by two identical stretched springs. The glider is pulled 5.0 cm to the left. When released, it oscillates without friction. The springs are always in tension.



**Fig. 3.2**

The variation of elastic potential energy stored in the springs with displacement,  $x$ , of the glider is shown in Fig. 3.3.



**Fig. 3.3**

8

- (i) Draw on Fig. 3.3 a graph to show the variation of kinetic energy with displacement of the glider. [2]
- (ii) Calculate the maximum speed of the glider.

maximum speed = .....  $\text{ms}^{-1}$  [1]

- (iii) Determine the period of the oscillations.

period = ..... s [2]



4 This question is about Mars and its two moons, Phobos and Deimos.

(a) Calculate

(i) the mass of Mars

gravitational field strength on the surface of Mars is  $3.7 \text{ N kg}^{-1}$   
radius of Mars is  $3.4 \times 10^3 \text{ km}$

mass = ..... kg [2]

(ii) the gravitational field strength at a height of  $3.4 \times 10^3 \text{ km}$  **above** the surface of Mars.

gravitational field strength = .....  $\text{N kg}^{-1}$  [1]

(b) (i) State Kepler's third law.

.....  
..... [1]

(ii) Phobos completes a circular orbit of mean radius  $9.4 \times 10^3$  km in 7.7 hours. Deimos completes its orbit in 30 hours.  
Calculate the mean radius of the orbit of Deimos.

mean radius = ..... km [2]

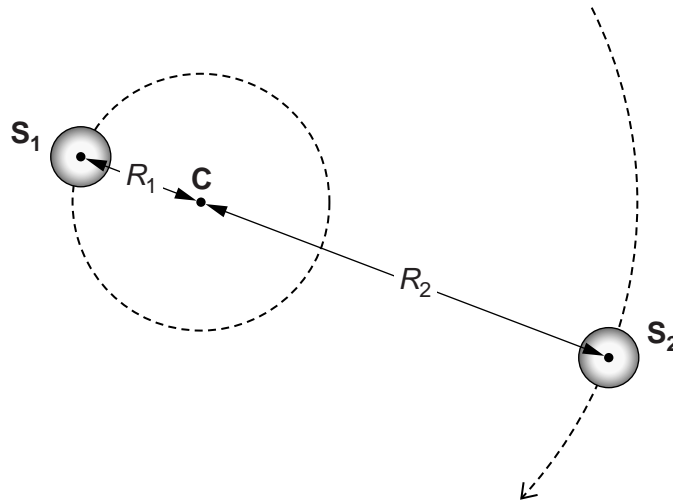
(c) Recent observations of Phobos indicate that it is slowly spiralling towards the surface of Mars. State and explain how you would expect this to affect the speed of Phobos.

.....  
.....  
..... [1]

11  
**BLANK PAGE**

**Question 5 begins on page 12**  
**PLEASE DO NOT WRITE ON THIS PAGE**

- 5 A binary star consists of two stars that orbit about their common centre of mass **C**, as shown in Fig. 5.1.



**Fig. 5.1**

The star **S**<sub>1</sub> has mass  $M_1$  and orbits in a circle of radius  $R_1$ . Star **S**<sub>2</sub> has mass  $M_2$  and a circular orbit of radius  $R_2$ . Both stars have the same orbital period  $T$  about **C**.

- (a) Using the terms  $G$ ,  $M_1$ ,  $M_2$ ,  $R_1$ ,  $R_2$  and  $T$  write an expression for

- (i) the gravitational force  $F$  experienced by each star

[1]

- (ii) the centripetal force  $F_1$  acting on the star **S**<sub>1</sub>

[1]

- (b) Use (a)(ii) to show that the ratio of the masses of the stars is given by the expression

$$\frac{M_1}{M_2} = \frac{R_2}{R_1}$$

[2]

- (c) The ratio of the masses,  $M_1/M_2$ , is equal to 3.0 and the separation between the stars is  $4.8 \times 10^{12}$  m.  
Calculate the radii  $R_1$  and  $R_2$ .

$$R_1 = \dots\dots\dots \text{ m}$$

$$R_2 = \dots\dots\dots \text{ m} \quad [3]$$

- (d) The orbital period  $T$  of each star is 4.0 years.  
Calculate the orbital speed of  $S_1$ .

$$\text{speed} = \dots\dots\dots \text{ ms}^{-1} \quad [2]$$

- (e) Calculate the mass of  $S_2$ .

$$\text{mass} = \dots\dots\dots \text{ kg} \quad [3]$$

- 6 Fig. 6.1 shows a tube containing small pellets of lead. When the tube is inverted the pellets of lead fall freely through a vertical height equal to the length of the tube. The pellets are warm after the tube has been inverted many times.

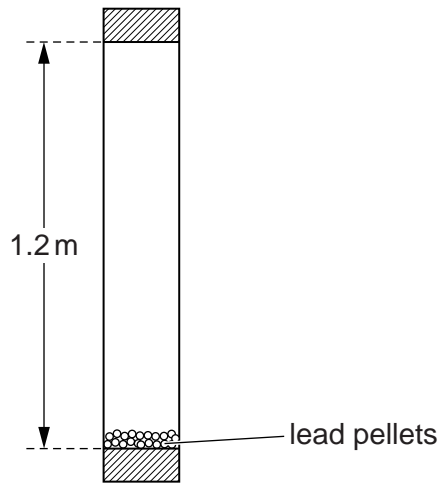


Fig. 6.1

- (a) Describe the energy changes that take place to the lead pellets following one inversion of the tube.

.....  
 .....  
 ..... [2]

- (b) The tube is used in an experiment to determine the specific heat capacity of lead. The following results are obtained.

total mass of lead pellets = 0.025 kg  
 number of inversions = 50  
 length of tube = 1.2 m  
 change in temperature of the lead = 4.5 °C

Use this information to calculate the specific heat capacity of the lead.

specific heat capacity ..... J kg<sup>-1</sup> K<sup>-1</sup> [4]

(c) State **two** assumptions you have made in your calculation of the specific heat capacity.

.....  
.....  
.....  
..... [2]

(d) State and explain the change, if any, you would expect to see in the temperature rise if the mass of the lead pellets is doubled.

.....  
.....  
.....  
..... [2]

**Question 7 begins on page 16**

- 7 (a) Explain how the *internal energy* of an ideal gas is related to its temperature.



*In your answer, you should use appropriate technical terms spelled correctly.*

.....

.....

.....

.....

..... [2]

- (b) A weather balloon is designed to be inflated to a maximum volume of  $1.4 \times 10^4 \text{ m}^3$ . To launch the balloon it is partially inflated with 80 kg of helium at a pressure of  $1.0 \times 10^5 \text{ Pa}$  and a temperature of  $21 \text{ }^\circ\text{C}$ .

molar mass of helium =  $0.004 \text{ kg mol}^{-1}$

- (i) Calculate the volume of the partially inflated balloon.

volume = .....  $\text{m}^3$  [3]



- (ii) To limit the maximum height that the balloon can reach, helium is allowed to leak out through a control valve.  
Determine the number of moles of helium that need to escape for the weather balloon to reach its maximum volume when the pressure is  $1.2 \times 10^3 \text{ Pa}$  and the temperature is  $-40^\circ\text{C}$ .

number of moles = ..... mol [2]

**END OF QUESTION PAPER**

**ADDITIONAL ANSWER SPACE**

If additional answer space is required, you should use the following lined page(s). The question number(s) must be clearly shown in the margins.

A large area of lined paper for writing answers. It features a vertical margin line on the left side and horizontal dotted lines for writing. The lines are evenly spaced and extend across the width of the page.



**PLEASE DO NOT WRITE ON THIS PAGE**



**Copyright Information**

OCR is committed to seeking permission to reproduce all third-party content that it uses in its assessment materials. OCR has attempted to identify and contact all copyright holders whose work is used in this paper. To avoid the issue of disclosure of answer-related information to candidates, all copyright acknowledgements are reproduced in the OCR Copyright Acknowledgements Booklet. This is produced for each series of examinations and is freely available to download from our public website ([www.ocr.org.uk](http://www.ocr.org.uk)) after the live examination series.

If OCR has unwittingly failed to correctly acknowledge or clear any third-party content in this assessment material, OCR will be happy to correct its mistake at the earliest possible opportunity.

For queries or further information please contact the Copyright Team, First Floor, 9 Hills Road, Cambridge CB2 1GE.

OCR is part of the Cambridge Assessment Group; Cambridge Assessment is the brand name of University of Cambridge Local Examinations Syndicate (UCLES), which is itself a department of the University of Cambridge.